



MADE EASY

India's Best Institute for IES, GATE & PSUs

Delhi | Bhopal | Hyderabad | Jaipur | Pune | Kolkata

Web: www.madeeasy.in | E-mail: info@madeeasy.in | Ph: 011-45124612

SIGNAL & SYSTEM

EC-EE

Date of Test : 18/04/2025

ANSWER KEY >

- | | | | | |
|--------|---------|---------|---------|---------|
| 1. (b) | 7. (a) | 13. (b) | 19. (a) | 25. (a) |
| 2. (c) | 8. (d) | 14. (d) | 20. (d) | 26. (c) |
| 3. (b) | 9. (a) | 15. (d) | 21. (a) | 27. (d) |
| 4. (b) | 10. (b) | 16. (b) | 22. (a) | 28. (b) |
| 5. (d) | 11. (c) | 17. (a) | 23. (d) | 29. (c) |
| 6. (a) | 12. (c) | 18. (b) | 24. (d) | 30. (c) |

DETAILED EXPLANATIONS

1. (b)

Given,
$$x(t) = \frac{\sin(10\pi t)}{\pi t}$$

Taking Fourier transform

$$X(j\omega) = \begin{cases} 1 & ; \quad |\omega| \leq 10\pi \\ 0 & ; \quad |\omega| > 10\pi \end{cases}$$

or

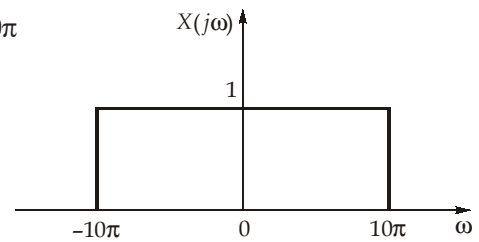
\therefore The maximum frequency ' ω_m ' present in $x(t)$ is $\omega_m = 10\pi$

Hence we require,

$$\frac{2\pi}{T_s} > 2\omega_m$$

$$\frac{2\pi}{T_s} > 20\pi$$

$$\therefore T_s < \frac{1}{10}$$



2. (c)

We know that,

$$\begin{aligned} a_n &= \frac{2}{T} \int_T x(t) (\cos \omega_0 n t) dt = \frac{2}{T} \int_T x(t) \left[\frac{e^{j\omega_0 n t} + e^{-j\omega_0 n t}}{2} \right] dt \\ &= \frac{1}{T} \left[\int_T x(t) e^{j\omega_0 n t} dt + \int_T x(t) e^{-j\omega_0 n t} dt \right] \end{aligned}$$

$$a_n = C_n + C_{-n} \quad [\text{By the definition of exponential Fourier series coefficient}].$$

3. (b)

$$\begin{aligned} F(\omega) &= \int_{-\infty}^{\infty} f(t) e^{-j\omega t} dt = \int_{-\infty}^{\infty} [f(t) \cos \omega t - j f(t) \sin \omega t] dt \\ &= \int_{-\infty}^{\infty} f(t) \cos \omega t dt - j \int_{-\infty}^{\infty} f(t) \sin \omega t dt \end{aligned}$$

$f(t) \Rightarrow$ even signal

$f(t) \cos \omega t \Rightarrow$ even signal

$f(t) \sin \omega t \Rightarrow$ odd signal

$$\int_{-\infty}^{\infty} f(t) \sin \omega t dt = 0$$

$$\int_{-\infty}^{\infty} f(t) \cos \omega t dt = 2 \int_0^{\infty} f(t) \cos \omega t dt$$

$$\therefore F(\omega) = 2 \int_0^{\infty} f(t) \cos \omega t dt$$

4. (b)

Given,
$$y(t) = \frac{1}{2}x\left(\frac{t}{2}\right) * \delta(t-4) = \frac{1}{2}x\left(\frac{t-4}{2}\right) = \frac{1}{2}x\left(\frac{1}{2}t-2\right)$$

at $t = 2$;
$$y(2) = \frac{1}{2}x\left(\frac{1}{2}(2)-2\right) = \frac{1}{2}x(-1)$$

Slope of given signal $x(t)$ is 2.

$$x(-1) = -2$$

$$y(2) = \frac{1}{2}(-2) = -1$$

5. (d)

The given sequence of $x[n]$ is finite duration. Hence, the region of convergence is $0 < |z| < \infty$.

6. (a)

$$r_{xx}(k) = \sum_{k=-\infty}^{\infty} x[n]x[n-k]$$

$$\begin{aligned} \sum_{k=-4}^{k=4} r_{xx}(k) &= x[n]x[n+3] + x[n]x[n+2] + x[n]x[n+1] + x[n]x[n] + x[n]x[n-1] \\ &\quad + x[n]x[n-2] + x[n]x[n-3] \\ &= -2 - 5 + 2 + 10 + 2 - 5 - 2 = 0 \end{aligned}$$

7. (a)

By Parseval's theorem,

Energy of a signal $x[n]$ is,
$$E = \frac{1}{2\pi} \int_{-\pi}^{\pi} |X(e^{j\omega})|^2 d\omega$$

where $X(e^{j\omega})$ is discrete time Fourier transform of $x[n]$,

So,
$$\frac{\sin(2n)}{\pi n} \xleftrightarrow{\text{DTFT}} X(e^{j\omega}) = \begin{cases} 1; & |\omega| \leq 2 \\ 0; & \text{otherwise} \end{cases}$$

\therefore Energy,
$$E = \frac{1}{2\pi} \int_{-2}^2 1 \cdot d\omega = \frac{1}{2\pi} [4]$$

\therefore
$$E = \frac{2}{\pi} = 0.64 \text{ J}$$

8. (d)

Given, DFT signal $x[n]$

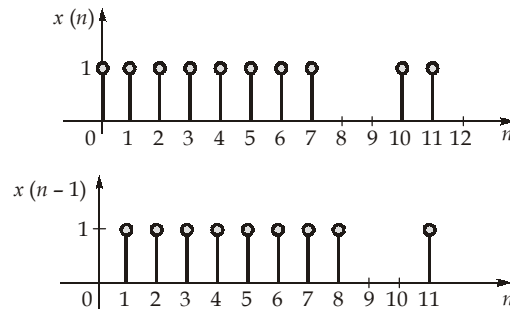
$$\{4, 1+2j, 2-2j, 3+j, -3, 3-j, 2+2j, 1-2j\}$$

$$\sum_{n=0}^7 (-1)^n x[n] = x[0] - x[1] + x[2] - x[3] + x[4] - x[5] + x[6] - x[7]$$

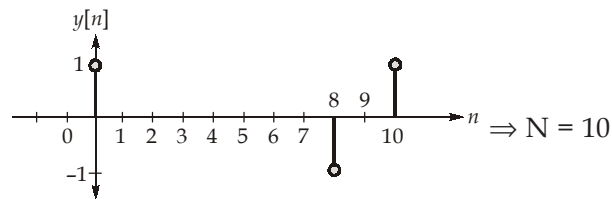
(or)

$$= X\left[\frac{8}{2}\right] = X[4] = -3$$

9. (a)



Subtracting the two signal, we get



10. (b)

For a causal system,

$$h(t) = 0 \quad \text{for } t < 0$$

Given,

$$x(t) = 0 \quad \text{for } t < -1$$

 \therefore

$$\begin{aligned} y(t) &= \int_{-\infty}^{\infty} x(\tau) h(t-\tau) d\tau = \int_{-\infty}^{\infty} h(\tau) x(t-\tau) d\tau \\ &= \int_0^{\infty} h(\tau) x(t-\tau) d\tau \quad \because h(\tau) = 0 \text{ for } \tau < 0 \\ &= \int_0^{t+1} h(\tau) x(t-\tau) d\tau \quad \because x(t-\tau) = 0 \text{ for } t-\tau < -1 \end{aligned}$$

11. (c)

We know that the Laplace transform of

$$\cos(at)u(t) = \frac{s}{s^2 + a^2}$$

$$\therefore \cos(\pi t)u(t) = \frac{s}{s^2 + \pi^2}$$

now, the given function $x(t)$ can be written as,

$$\begin{aligned} &= \cos\pi t[u(t) - u(t-1)] \\ &= \cos(\pi t)u(t) - \cos\pi t u(t-1) \\ &= \cos\pi t u(t) - \cos\pi(t-1+1)u(t-1) \\ &= \cos\pi t u(t) - \cos[\pi(t-1) + \pi]u(t-1) \\ x(t) &= \cos(\pi t)u(t) + \cos[\pi(t-1)]u(t-1) \end{aligned}$$

By taking Laplace transform,

$$X(s) = \frac{s}{s^2 + \pi^2} + \frac{s e^{-s}}{s^2 + \pi^2} \quad [\because x(t-t_0) = X(s) \cdot e^{-st_0}, \text{ by shifting property}]$$

$$X(s) = \frac{s[1 + e^{-s}]}{s^2 + \pi^2}$$

12. (c)

Given, sinusoidal pulse

$$z(t) = \begin{cases} e^{j10t} & ; |t| < \pi \\ 0 & ; |t| > \pi \end{cases}$$

We may express $z(t)$ as the product of a complex sinusoid e^{j10t} and a rectangular pulse $x(t)$.

Let,

$$x(t) = \begin{cases} 1 & ; |t| < \pi \\ 0 & ; |t| > \pi \end{cases}$$

Fourier transform of $x(t)$ is $X(j\omega)$

$$\begin{aligned} \therefore X(j\omega) &= \int_{-\infty}^{\infty} x(t)e^{-j\omega t} dt = \int_{-\pi}^{\pi} 1 \cdot e^{-j\omega t} dt = \left[\frac{e^{-j\omega t}}{-j\omega} \right]_{-\pi}^{\pi} \\ &= -\frac{1}{j\omega} [e^{-j\omega\pi} - e^{+j\omega\pi}] = \frac{e^{j\omega\pi} - e^{-j\omega\pi}}{j\omega} = \frac{2}{\omega} \left[\frac{e^{j\omega\pi} - e^{-j\omega\pi}}{2j} \right] \end{aligned}$$

$$\therefore X(j\omega) = \frac{2}{\omega} \sin(\omega\pi)$$

By using frequency shift property of Fourier transform, we get,

$$z(t) = e^{j10t} \cdot x(t) \xrightarrow{\text{FT}} X(j(\omega - 10))$$

$$\therefore z(t) \xrightarrow{\text{FT}} \frac{2}{\omega - 10} \sin((\omega - 10)\pi)$$

13. (b)

Given, $X(s) = \log(s + 2) - \log(s + 3)$

Differentiating both the sides with respect to s

$$\frac{d}{ds} X(s) = \frac{1}{s+2} - \frac{1}{s+3} \tag{...i}$$

From the properties of Laplace transform, we know that,

$$tx(t) \longleftrightarrow -\frac{d}{ds} X(s)$$

Thus equation (i) can be written as,

$$-tx(t) = [e^{-2t} - e^{-3t}]u(t)$$

or,

$$x(t) = \left[\frac{e^{-3t} - e^{-2t}}{t} \right] u(t)$$

14. (d)

By redrawing the given frequency response, we get,

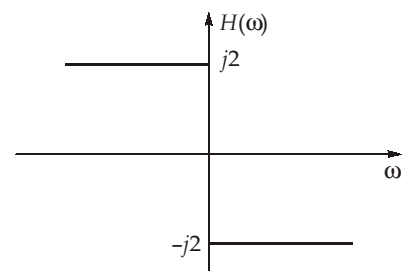
We can write $H(\omega) = -j2 \operatorname{sgn}(\omega)$

We know that,

For $\operatorname{sgn}(t) \xrightarrow{\text{FT}} \frac{2}{j\omega}$

By duality property

$$\frac{2}{jt} \xrightarrow{\text{FT}} 2\pi \operatorname{sgn}(-\omega)$$



$$\frac{2}{jt} \xrightarrow{\text{FT}} -2\pi \operatorname{sgn}(\omega)$$

$$\frac{2}{\pi t} \xrightarrow{\text{FT}} -j2\operatorname{sgn}(\omega)$$

or

$$= 2(\pi t)^{-1}$$

15. (d)

Given $x(t) = \sin(150\pi t)$

Time period, $T = \frac{2\pi}{\omega_0} = \frac{2\pi}{150\pi} = \frac{1}{75} \text{ sec}$

$$3 \text{ time periods} = 3 \times T = 3 \times \frac{1}{75} = \frac{1}{25} \text{ sec}$$

\therefore The signal sampled at a rate of five samples is $\frac{1}{25} \text{ sec}$

So, 1 sample in $\frac{1}{125} \text{ sec} = T_s$ [sampling interval]

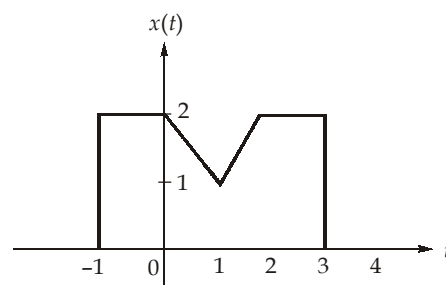
$$\therefore \text{ Sampling frequency} = f_s = \frac{1}{T_s} = 125 \text{ samples/sec}$$

also, Nyquist rate $= f_N = 2f_m = 2 \times 75$ [$\because \omega_m = 150\pi \Rightarrow f_m = 75 \text{ Hz}$]
 $= 150 \text{ samples/sec}$

$$\therefore \text{ The ratio, } \frac{f_s}{f_N} = \frac{125}{150} = \frac{5}{6} = 0.83$$

16. (b)

Given,



By the definition of Fourier transform,

$$X(j\omega) = \int_{-\infty}^{\infty} x(t) \cdot e^{-j\omega t} dt$$

$$x(t) = \frac{1}{2\pi} \int_{-\infty}^{\infty} X(j\omega) \cdot e^{j\omega t} d\omega$$

at $t = 0$,

$$x(0) = \frac{1}{2\pi} \int_{-\infty}^{\infty} X(j\omega) d\omega$$

$$\therefore \int_{-\infty}^{\infty} X(j\omega) d\omega = 2\pi x(0) = 2\pi(2) = 4\pi \approx 12.57$$

17. (a)

$$X(z) = \sum_{n=-\infty}^{\infty} x(n)z^{-n} = \sum_{n=0}^{\infty} \frac{2^{-n}}{n!} z^{-n}$$

$$= \sum_{n=0}^{\infty} \frac{(2z)^{-n}}{n!} = \sum_{n=0}^{\infty} \frac{\left(\frac{1}{2z}\right)^n}{n!}$$

$$X(z) = 1 + \frac{1}{2z} + \frac{\left(\frac{1}{2z}\right)^2}{2!} + \frac{\left(\frac{1}{2z}\right)^3}{3!} + \dots$$

$$X(z) = e^{1/2z}$$

$$X(1) = e^{1/2} = \sqrt{e} = 1.648 \approx 1.65$$

18. (b)

$$X[k] = \sum_{n=0}^{N-1} x[n] e^{-j\frac{2\pi}{N}nk}$$

$$g[n] = x[n-2]_{\text{mod } N}$$

$$G[k] = e^{-j\frac{2\pi}{N}(2)k} X[k]$$

$$G[1] = e^{-j\frac{2\pi}{4}(2)1} X[1] = e^{-j\pi} X[1]$$

$$G[1] = -X[1] = -7$$

19. (a)

Given,

$$X(z) = \frac{10 - 8z^{-1}}{2 - 5z^{-1} + 2z^{-2}}$$

$$= \frac{2}{(2 - z^{-1})} + \frac{4}{(1 - 2z^{-1})}$$

$$X(z) = \frac{2z}{2z-1} + \frac{4z}{z-2}$$

$$X(z) = \frac{z}{\left(z - \frac{1}{2}\right)} + \frac{4z}{(z-2)}$$

Since, ROC includes unit circle,

∴ ROC of $X(z)$ is $\frac{1}{2} < |z| < 2$

$$x[n] = \left(\frac{1}{2}\right)^n u[n] - 4(2^n)u[-n-1]$$

∴ $x(1) = \frac{1}{2} = 0.5$

20. (d)

Given: $x(n) = \{-2, -3, \underset{\uparrow}{-5}, 3, 2\}$

Using Parseval's Theorem,

$$\sum_{n=-\infty}^{\infty} |x(n)|^2 = \frac{1}{2\pi} \int_{-\pi}^{\pi} |X(e^{j\omega})|^2 d\omega$$

$$\int_{-\pi}^{\pi} |X(e^{j\omega})|^2 d\omega = 2\pi \sum_{n=-\infty}^{\infty} |x(n)|^2$$

$$\sum_{n=-\infty}^{\infty} |x(n)|^2 = \sum_{n=-2}^2 |x(n)|^2 = (-2)^2 + (-3)^2 + (-5)^2 + (3)^2 + (2)^2 = 51$$

$$2 \int_{-\pi}^{\pi} |X(e^{j\omega})|^2 d\omega = 4\pi \times 51 = 204\pi$$

$$2 \int_{-\pi}^{\pi} |X(e^{j\omega})|^2 d\omega = 204\pi$$

21. (a)

Given, signal $x[n] = (0.5)^{2n} u[n] = \left(\frac{1}{2}\right)^{2n} u[n] = \left(\frac{1}{4}\right)^n u[n]$

From the definition of DTFT, the signal can be written as,

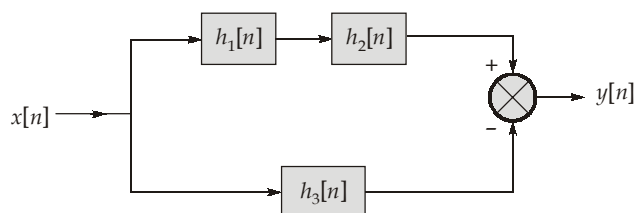
$$X(e^{j\omega}) = \frac{1}{1 - \frac{1}{4}e^{-j\omega}}$$

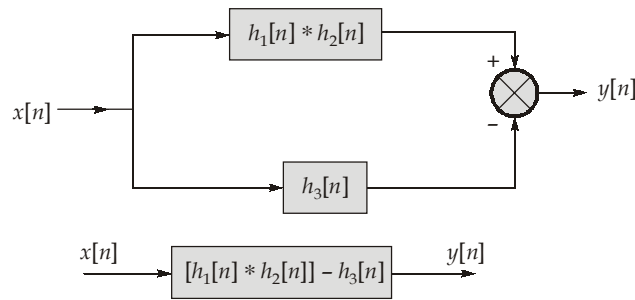
$$X(e^{j\omega}) = \frac{4}{4 - e^{-j\omega}}$$

at $\omega = \pi$, $X(e^{j\pi}) = \frac{4}{4 - \cos \pi} = \frac{4}{4 - (-1)} = \frac{4}{5} = 0.8$

22. (a)

Given,





From the given figure, overall impulse response,

$$\begin{aligned} \therefore h[n] &= [h_1[n] * h_2[n]] - h_3[n] \\ &= [u[n+2] * \delta[n-2]] - [u[n] - u[n-2]] \\ &= u[n] - u[n] + u[n-2] && \{\therefore x[n] * \delta[n-n_0] = x[n-n_0]\} \\ h[n] &= u[n-2] \\ \text{at } n = 2; \quad h[2] &= u[2-2] = u[0] = 1 \end{aligned}$$

23. (d)

Given,
$$h(n) = \left(\frac{7}{8}\right)^n u(n)$$

Taking DTFT

$$\begin{aligned} H(e^{j\omega}) &= \frac{1}{1 - \left(\frac{7}{8}\right)e^{-j\omega}} \\ H(e^{j\omega}) &= \frac{1}{1 - \frac{7}{8}\cos\omega + j\frac{7}{8}\sin\omega} \\ H(e^{j\omega}) &= \frac{1}{\left(1 - \frac{7}{8}\cos\omega\right) + j\left(\frac{7}{8}\sin\omega\right)} \end{aligned}$$

Let half power frequency bandwidth be ω_0

$$\left|H(e^{j\omega})\right|_{\omega=\omega_0} = \frac{1}{\sqrt{2}} \left|H(e^{j\omega})\right|_{\max(\omega=0)}$$

$$\frac{1}{\sqrt{\left(1 - \frac{7}{8}\cos\omega_0\right)^2 + \left(\frac{7}{8}\sin\omega_0\right)^2}} = \frac{1}{\sqrt{2}} \times 8$$

$$1 + \left(\frac{7}{8}\cos\omega_0\right)^2 - \frac{7}{4}\cos\omega_0 + \left(\frac{7}{8}\sin\omega_0\right)^2 = \frac{1}{32}$$

$$1 + \left(\frac{7}{8}\right)^2 - \frac{7}{4}\cos\omega_0 = \frac{1}{32}$$

$$\cos\omega_0 = \frac{111}{64} \times \frac{4}{7}$$

$$\omega_0 = 0.1337 \text{ radians/sec}$$

24. (d)

Given: $x(n) = 3n^3(3)^n u(n)$

$$Y(z) = -\frac{d}{dz}X(z)$$

We know, from the differentiation property of z-transform,

$$nx(n) \xleftrightarrow{Z.T} -z \frac{dX(z)}{dz}$$

Using time shifting property of z-transform,

$$(n-1)x(n-1) \xleftrightarrow{Z.T} \frac{-z^{-1}z dX(z)}{dz}$$

$$y(n) = (n-1)x(n-1) \xleftrightarrow{Z.T} \frac{-dX(z)}{dz} = Y(z)$$

$$y(n) = (n-1)(3(n-1)^3 3^{n-1})u(n-1)$$

$$y(n) = (n-1)^4(3)^{n+1-1} u(n-1)$$

$$y(n) = (n-1)^4 (3)^n u(n-1)$$

25. (a)

The Fourier series representation of signal $x(t)$ is,

$$x(t) = \sum_{n=-\infty}^{\infty} C_n e^{jn\omega_0 t}$$

where,

$$\omega_0 = \frac{2\pi}{T} = \frac{2\pi}{\left(\frac{\pi}{8}\right)} = 16 \text{ rad/sec}$$

When $x(t)$ is passed through given low-pass filter,

the output is,
$$y(t) = \sum_{n=-\infty}^{\infty} C_n H(jn\omega_0) e^{jn\omega_0 t}$$

∴ The largest value of 'n' for which $y(t)$ is non-zero is given by,

$$n\omega_0 \leq 170$$

$$16n \leq 170$$

$$n \leq 10.6$$

∴ maximum harmonics present at the output of filter is 10.

26. (c)

$$x(t) = \underbrace{4 \cos\left(\frac{2\pi}{3}t + 40^\circ\right)}_{x_1(t)} + \underbrace{3 \sin\left(\frac{4\pi}{5}t + 20^\circ\right)}_{x_2(t)}$$

$$\omega_1 = \frac{2\pi}{3} \Rightarrow T_1 = \frac{2\pi}{\omega_1} = \frac{2\pi}{2\pi/3} = 3$$

$$\omega_2 = \frac{4\pi}{5} \Rightarrow T_2 = \frac{2\pi}{4\pi/5} = \frac{5}{2}$$

$$T = \text{LCM of } (T_1, T_2)$$

$$T = \frac{\text{LCM of numerators}}{\text{HCF of denominators}}$$

$$\Rightarrow T = \frac{3 \times 5}{1} = 15 \text{ sec}$$

27. (d)

Given, $x[n]$ is a causal sequence,

$\therefore x[n]$ will be zero for $n < 0$.

$$y[n] = \sum_{k=-\infty}^{\infty} x[k] h[n-k]$$

and
$$h[n] = \left(\frac{1}{4}\right)^n u[n]$$

$$h[n] = \begin{cases} \left(\frac{1}{4}\right)^n & ; n \geq 0 \\ 0 & ; n < 0 \end{cases}$$

$$\therefore h[0] = 1, \quad h[1] = \frac{1}{4}, \quad h[2] = \frac{1}{16}$$

$$y[0] = x[0] h[0] + x[1] h[-1] + \dots$$

$$\frac{1}{2} = x[0] (1) + x[1] \times 0$$

$$\therefore x[0] = \frac{1}{2}$$

$$y[1] = x[0] h[1] + x[1] h[0] + x[2] h[-1] + \dots$$

$$1 = \left(\frac{1}{2}\right)\left(\frac{1}{4}\right) + x[1][1] + x[2][0]$$

$$1 - \frac{1}{8} = x[1]$$

$$\therefore x[1] = \frac{7}{8} = 0.875$$

28. (b)

Given,
$$h[n] = \left(\frac{1}{2}\right)^n u[n]$$

Now, we may write $h[n] - Ah[n-1] = \delta[n]$

$$\text{as } \left(\frac{1}{2}\right)^n u[n] - A\left(\frac{1}{2}\right)^{n-1} u[n-1] = \delta[n]$$

Substitute $n = 1$, we get,

$$\left(\frac{1}{2}\right)^1 u[1] - A\left(\frac{1}{2}\right)^{1-1} u[1-1] = \delta[1]$$

$$\Rightarrow \frac{1}{2} - A = 0 \quad (\because \delta[1] = 0)$$

$$\therefore A = \frac{1}{2}$$

29. (c)

Using Parseval's theorem, the energy of signal $x(n)$ is,

$$E = \sum_{n=-\infty}^{\infty} |x(n)|^2 = \frac{1}{N} \sum_{K=0}^{N-1} |X(K)|^2$$

Here, $X(0) = 3, X(1) = 2 + j; X(2) = j$

Using conjugate property of DFT,

$$X(K) = X^*(N - K)$$

$$N = 4$$

$$X(3) = X^*(4 - 3)$$

$$= X^*(1)$$

$$X(3) = 2 - j$$

$$E = \frac{1}{4} [|X(0)|^2 + |X(1)|^2 + |X(2)|^2 + |X(3)|^2]$$

$$= \frac{1}{4} [3^2 + (4 + 1) + 1 + (4 + 1)]$$

$$= \frac{1}{4} [9 + 5 + 1 + 5]$$

$$E = 5 \text{ Joules}$$

30. (c)

$$X(z) = \frac{z \left(z - \frac{1}{3} \right)}{(z - 1)(z + 2)}$$

$$\frac{X(z)}{z} = \frac{\left(z - \frac{1}{3} \right)}{(z - 1)(z + 2)}$$

Using partial fraction expansion,

$$\frac{X(z)}{z} = \frac{\frac{2}{3}}{3(z - 1)} + \frac{\frac{7}{3}}{3(z + 2)}$$

$$X(z) = \frac{2}{9} \left(\frac{z}{z - 1} \right) + \frac{7}{9} \left(\frac{z}{z + 2} \right)$$

$$\text{ROC: } |z| > 2$$

$\therefore x(n)$ is a right-sided signal.

Taking inverse z-transform of $X(z)$,

$$x(n) = \frac{2}{9} u(n) + \frac{7}{9} (-2)^n u(n)$$

$$\text{At } n = 2, \quad x(2) = \frac{2}{9} + \frac{7}{9} (-2)^2 = \frac{2}{9} + \frac{7}{9} \times 4 = \frac{30}{9}$$

$$x(2) = 3.33$$

