



MADE EASY

India's Best Institute for IES, GATE & PSUs

ESE 2019

Preliminary Examination

Detailed Solutions of
Civil Engineering
(Set-A)

[Scroll down for detailed solutions](#)

www.madeeasy.in

Corporate Office: 44-A/1, Kalu Sarai, New Delhi - 110016 | Ph: 011-45124612, 9958995830

Delhi | Hyderabad | Noida | Bhopal | Jaipur | Lucknow | Indore | Pune | Bhubaneswar | Kolkata | Patna

Expected Cutoff of ESE 2019 Prelims					Actual Cutoff of ESE 2018 Prelims				
Branch	Gen	OBC	SC	ST	Branch	Gen	OBC	SC	ST
CE	180-190	170-180	150-160	150-160	CE	207	194	169	188
ME	190-200	180-190	160-170	160-170	ME	256	255	220	223
EE	230-240	220-230	190-200	190-200	EE	230	218	190	191
E&T	210-220	200-210	170-180	170-180	E&T	213	206	173	155

Civil Engineering Paper Analysis ESE 2019 Prelims Exam

Sl.	Subjects	Number of Questions
1	Building Materials and Construction	13
2	Strength of Materials	17
3	Structural Analysis	9
4	Steel Structures	12
5	RCC	13
6	Construction Planning and Management	12
7	Fluid + Hydraulic Machine + OCF	12
8	Engineering Hydrology	3
9	Irrigation Engineering	10
10	Environmental Engineering	12
11	Geotechnical Engineering	13
12	Surveying and Geology	12
13	Transportation Engineering	12

UPSC ESE/IES Prelims 2019 : Civil Engineering
analysis and expected cutoff by MADE EASY faculty

<https://youtu.be/IHyKkywcrTA>

4. Which one of the following statements is not correct with respect to the properties of cement?
- (a) Highly reactive Pozzolanas enhance the early age strength of the composite cement.
 - (b) Pozzolanic activity refines pore structure which decreases electrolytic resistance of concrete.
 - (c) The expansion due to alkali-silica reaction can be controlled by replacement of as high as 60% of OPC with high-calcium Pozzolana.
 - (d) Such high amounts of replacement cements result in higher accelerated carbonation depths compared to pure use of OPC only.

Ans. (a)

End of Solution

5. Hydration of which compound is responsible for increase in strength of cement in later age?
- (a) Tri-calcium Aluminate (C_3A)
 - (b) Tetra-calcium Aluminoferrite (C_4AF)
 - (c) Tri-calcium Silicate (C_3S)
 - (d) Di-calcium Silicate (C_2S)

Ans. (d)

Dicalcium silicate (C_2S) is responsible for later gain of strength i.e., after 28 days it is the only compound that contributes in strength.

End of Solution

6. The creep strain of cement attains its terminal value by
- (a) 1 year
 - (b) 2 years
 - (c) 5 years
 - (d) 6 months

Ans. (c)

The creep strain of cement attains its terminal value by 5 yrs.

- Creep strain is due to continuous sustained load for long term; where initially it increases, then starts reducing.

End of Solution

7. Which of the following methods will help in reducing segregation in concrete?
1. Not using vibrator to spread the concrete.
 2. Reducing the continued vibration.
 3. Improving the cohesion of a lean dry mix through addition of a further small quantity of water.
- (a) 1, 2 and 3
 - (b) 1 and 2 only
 - (c) 1 and 3 only
 - (d) 2 and 3 only

Ans. (a)

End of Solution

8. On an average, in a 125 mm slump, the concrete may lose about (in first one hour)
- (a) 15 mm of slump (b) 25 mm of slump
(c) 40 mm of slump (d) 50 mm of slump

Ans. (d)

The slump loss is negligible in the first half hour (due to small volume of hydration products), and on an average, a 120 mm slump concrete may lose about 50 mm in the first one hour.

End of Solution

9. Permeability in concrete is studied towards providing for, or guarding against, which of the following features?
1. The penetration by materials in solution may adversely affect the durability of concrete; moreover, aggressive liquids 'attack' the concrete.
 2. In case of reinforced concrete, ingress of moisture and air will result in corrosion of steel leading to an increase in volume of steel, resulting in cracking and spalling of the concrete cover.
 3. The moisture penetration depends on permeability and if the concrete can become saturated with water it is less vulnerable to frost action.
- (a) 1, 2 and 3 (b) 1 and 2 only
(c) 1 and 3 only (d) 2 and 3 only

Ans. (b)

Moisture penetration depends on permeability but when concrete is saturated with water, then chances of frost action will be more.

End of Solution

10. Poisson's ratio of concrete μ can be determined using the formula

$$(a) \left(\frac{V}{2nL} \right) = \frac{(1-\mu)}{(1-2\mu)(1+\mu)} \quad (b) \left(\frac{V}{2nL} \right) = \frac{(1+\mu)}{(1-2\mu)(1+\mu)}$$
$$(c) \left(\frac{V^2}{2nL} \right) = \frac{(1-\mu)}{(1-2\mu)(1+\mu)} \quad (d) \left(\frac{V^2}{2nL} \right) = \frac{(1-\mu^2)}{(1-2\mu)(1+\mu)}$$

where V is pulse velocity, in mm/s,

n is resonant frequency of longitudinal vibration, in Hz,

L is distance between transducers, in mm

Ans. (*)

A per IS 13311 (Part 1): 1992

The dynamic Poisson's ratio may be obtained from measurements on concrete test beams of the velocity (v) alongwith length (L) of the beam and the fundamental resonant frequency (n) of the beam in longitudinal mode of vibration is related as

$$\frac{v^2}{(2nL)^2} = \frac{1-\mu}{(1-2\mu)(1+\mu)}$$

End of Solution

11. Which one of the following methods/techniques will be used for placing of concrete in dewatered "Caissons or Coffers" dams?
- (a) Tremie method (b) Placing in bags
(c) Prepacked concrete (d) In-the-dry practice

Ans. (d)

Placing of concrete in dewatered "Caissons or Coffers" Dams follows normal in "Dry practice".

[Reference 12.4.1; concrete technology by Gambhir]

End of Solution

12. The minimum cement content (kg/m^3) for a pre-specified strength of concrete (using standard notations) premised on 'free water-cement ratio' will be as

(a) $1 - \frac{C}{1000S_c} - \frac{W}{1000}$

(b) $\frac{\text{Water Content}}{\text{Water Cement Ratio}}$

(c) Water Content \times Water Cement Ratio


(d) $\frac{100F}{C + F}$

Ans. (b)

End of Solution

13. A bar specimen of 36 mm diameter is subjected to a pull of 90 kN during a tension test. The extension on a gauge length of 200 mm is measured to be 0.089 mm and the change in diameter to be 0.0046 mm. The Poisson's ratio will be
- (a) 0.287 (b) 0.265
(c) 0.253 (d) 0.241

Ans. (a)



$$d = 36 \text{ mm}$$

$$L = 200 \text{ mm}, \Delta L = 0.089 \text{ mm}$$

$$\Delta d = 0.0046 \text{ mm}$$

$$\mu = \frac{\Delta d/d}{\Delta L/L} = \frac{0.0046/36}{0.089/200}$$

$$\mu = 0.287$$

End of Solution

14. A steel rod 15 m long is at a temperature of 15°C. The values of $\alpha = 12 \times 10^{-6}/^\circ\text{C}$ and $E = 200 \text{ GN/m}^2$ are adopted. When the temperature is raised to 65°C, what is the free expansion of the length; and if this expansion of the rod is fully prevented, what is the temperature stress produced?
- (a) 5 mm and 120 MN/m² (b) 9 mm and 120 MN/m²
(c) 5 mm and 150 MN/m² (d) 9 mm and 150 MN/m²

Ans. (b)

$$\begin{aligned}\Delta L &= L \alpha \Delta T \\ &= (15 \times 10^3) (12 \times 10^{-6}) (65 - 15) \\ &= 9 \text{ mm} \\ \sigma &= E \alpha \Delta T \\ &= (200 \times 10^3 \times 12 \times 10^{-6} \times 50) \\ &= 120 \text{ MN/m}^2\end{aligned}$$

End of Solution

15. A bar of uniform rectangular section of area A is subjected to an axial tensile load P ; its Young's modulus is E and its Poisson's ratio is $\frac{1}{m}$. Its volumetric strain ϵ_v is
- (a) $\frac{P}{AE} \left(1 + \frac{3}{m}\right)$ (b) $\frac{P}{AE} \left(1 + \frac{2}{m}\right)$
(c) $\frac{P}{AE} \left(1 - \frac{2}{m}\right)$ (d) $\frac{P}{AE} \left(1 - \frac{2}{2m}\right)$

Ans. (c)

$$\begin{aligned}\epsilon_v &= \frac{\sigma_x + \sigma_y + \sigma_z}{E} (1 - 2\mu) && \left(\because \mu = \frac{1}{m} \right) \\ \sigma_x &= \frac{P}{A} \\ \sigma_y &= \sigma_z = 0 \\ \epsilon_v &= \frac{P}{AE} \left(1 - \frac{2}{m}\right)\end{aligned}$$

End of Solution



MADE EASY

India's Best Institute for IES, GATE & PSUs

Mains Exclusive Batches for ESE 2019 Conventional Questions Practice Programme

Commencing from **20th Feb, 2019**

These batches are offered only at **Delhi Centre.**

+

Mains Test Series for ESE 2019 (Offline Mode / Online Mode)

Commencing from **17th Mar, 2019**

Test series will be conducted at **all MADE EASY** centres across India.

Features :

- Very useful to develop numerical solving approach & improving writing skills.
- Special focus on improving answer layout specially for theory questions.
- Classes will be delivered by senior faculties.
- Updated Mains workbook for every subject having varied practice question sets.
- Test series will be conducted on every Sunday in synchronisation with the subject taught in class.
- Discussion on probable questions.
- Comprehensive and in-depth discussion on variety of conventional questions, thus strengthening fundamental concepts.

Batch Details	Course Duration	Class Duration	Test Series
	90 days 300 - 350 hours	5-6 days a week and 6-7 hours a day	Every Sunday

Streams	Batch Code	Batch Commencing Date	Venue (Delhi)	Timing
ME	A	20-Feb-2019	Ghitorni Centre	7:30 AM to 1:30 PM
ME	B	20-Feb-2019	Ghitorni Centre	3:00 PM to 9:00 PM
ME	C	20-Feb-2019	Saket Centre	7:30 AM to 1:30 PM
CE	A	21-Feb-2019	Ignou Road Centre	7:30 AM to 1:30 PM
CE	B	21-Feb-2019	Kalu Sarai Centre	3:00 PM to 9:00 PM
EE	A	22-Feb-2019	Lado Sarai Centre	7:30 AM to 1:30 PM
EE	B	22-Feb-2019	Kalu Sarai Centre	3:00 PM to 9:00 PM
EC	A	22-Feb-2019	Lado Sarai Centre	7:30 AM to 1:30 PM

Program	Ex. MADE EASY Students Enrolled in Postal, Rank Improvement, Mains, GS, Post-GATE, ESE+ GATE, GATE Batches	Non MADE EASY students
Mains Exclusive Batch (Inclusive of ESE-2019 Mains Offline Test Series)	₹ 18,500	₹ 22,500
ESE 2019 Mains Offline Test Series	₹ 2,500	₹ 3,500

All Fees are Inclusive of GST

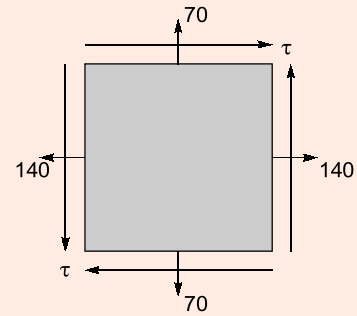
Hostel facility will be arranged

16. The normal stresses on two mutually perpendicular planes are 140 N/mm^2 (Tensile) and 70 N/mm^2 (Tensile). If the maximum shear stress is 45 N/mm^2 , the shear stress on these planes will be nearly

- (a) 20.9 N/mm^2 (b) 24.6 N/mm^2
(c) 28.3 N/mm^2 (d) 32.0 N/mm^2

Ans. (c)

$$\begin{aligned}\sigma_x &= 140 \\ \sigma_y &= 70 \\ \sigma_{xy} &= \tau \\ \tau_{\max} &= 45 = \frac{1}{2} \sqrt{(\sigma_y - \sigma_x)^2 + 4\tau_{xy}^2} \\ 45 &= \frac{1}{2} \sqrt{(70 - 140)^2 + 4\tau^2} \\ \tau &= 28.28 \text{ MPa}\end{aligned}$$



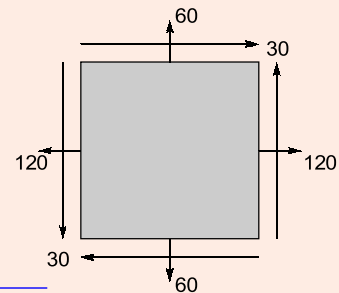
End of Solution

17. The normal stresses on the two mutually perpendicular planes at a point are 120 MPa (Tensile) and 60 MPa (Tensile). If the shear stress across these planes is 30 MPa , the principal stresses will be nearly

- (a) 124 MPa (Tensile) and 24 MPa (Compressive)
(b) 132 MPa (Tensile) and 24 MPa (Compressive)
(c) 124 MPa (Tensile) and 48 MPa (Tensile)
(d) 132 MPa (Tensile) and 48 MPa (Tensile)

Ans. (d)

$$\begin{aligned}\sigma_x &= 120 \text{ MPa} \\ \sigma_y &= 60 \text{ MPa} \\ \tau_{xy} &= 30 \text{ MPa} \\ \sigma_{P1}/\sigma_{P2} &= \frac{\sigma_x + \sigma_y}{2} \pm \frac{1}{2} \sqrt{(\sigma_y - \sigma_x)^2 + 4\tau_{xy}^2} \\ &= \frac{120 + 60}{2} \pm \frac{1}{2} \sqrt{(60 - 120)^2 + 4(30)^2} \\ \sigma_{P1} &= 132.43 \text{ MPa} \\ \sigma_{P2} &= 47.58 \text{ MPa}\end{aligned}$$

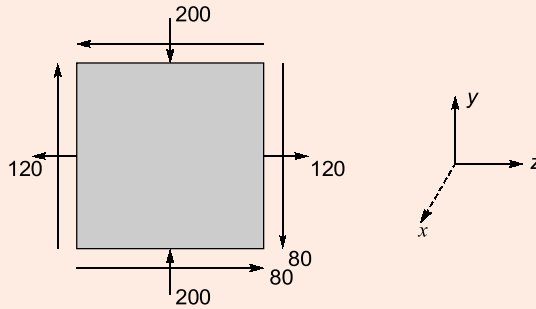


End of Solution

18. At a point in a material, the stresses acting on two planes at right angles to each other are: $\sigma_z = 120$ MPa and $\sigma_y = -200$ MPa and $\tau_{zy} = -80$ MPa. The maximum shear stress on the element will be nearly

- (a) 142 MPa (b) 155 MPa
(c) 167 MPa (d) 179 MPa

Ans. (d)



$$\sigma_z = 120 \text{ MPa}$$

$$\sigma_y = -200 \text{ MPa}$$

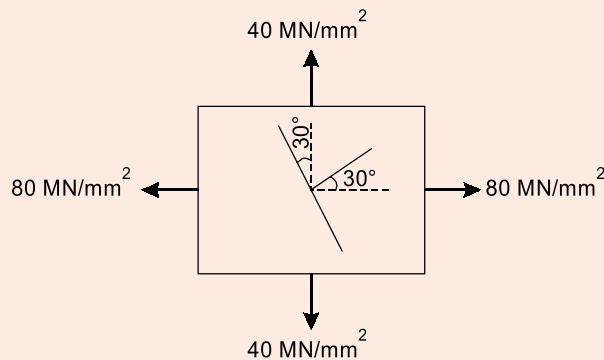
$$\tau_{\max} = \frac{1}{2} \sqrt{(\sigma_y - \sigma_z)^2 + 4\tau_{yz}^2}$$

$$= \frac{1}{2} \sqrt{(-200 - 120)^2 + 4(-80)^2}$$

$$\tau_{\max} = 178.88 \text{ MPa}$$

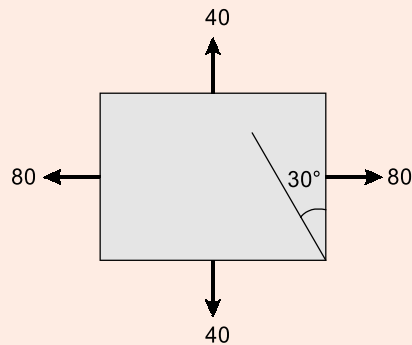
End of Solution

19. The principal stresses in the wall of a container are 40 MN/mm^2 and 80 MN/mm^2 . The normal makes an angle of 30° with a direction of maximum principal stress. The resultant stresses (in magnitude) in the plane will be nearly



- (a) 84 MN/mm^2 (b) 72 MN/mm^2
(c) 64 MN/mm^2 (d) 58 MN/mm^2

Ans. (b)



$$\theta = 30^\circ$$

$$\begin{aligned}\sigma_x' &= \sigma_x \cos^2 \theta + \sigma_y \sin^2 \theta + 2\tau_{xy} \cos\theta \sin\theta \\ &= 80 \cos^2 30^\circ + 40 \sin^2 30^\circ\end{aligned}$$

$$\sigma_x' = 60 + 10 = 70 \text{ MPa}$$

$$\begin{aligned}\tau_{x'y'} &= (\sigma_y - \sigma_x) \cos\theta \sin\theta + \tau_{xy}(\cos^2\theta - \sin^2\theta) \\ &= (40 - 80) \cos 30^\circ \sin 30^\circ \\ &= -17.32 \text{ MPa}\end{aligned}$$

$$\sigma_{\text{res}} = \sqrt{\sigma_x'^2 + \tau_{x'y'}^2} = \sqrt{(70)^2 + (-17.32)^2}$$

$$\sigma_{\text{res}} = 72.11 \text{ MPa}$$

End of Solution

20. The change in shearing force between two points on the beam is equal to the area of
- Loading diagram between the two points
 - Shear force diagram between the two points
 - Bending moment diagram between the two points
 - M/EI diagram between the two points

Ans. (a)

$$L = \frac{dV}{dx}$$

$$\int_1^2 dV = \int_1^2 L dx$$

$$V_2 - V_1 = \text{Area of loading diagram between point 1 and 2}$$

End of Solution

21. Which one of the following statements specifies shear flow?
- Flow of shear force along the beam
 - It is the product of the shear stress at any level and the corresponding width b (of the section)
 - Unbalanced force on any side of given section divided by area of section
 - The deformation at any level due to sudden variation in shear stress

Ans. (b)

$$\text{Shear stress, } \tau = \frac{S\bar{A}y}{Ib}$$

$$\text{Shear flow, } \tau \cdot b = \frac{S\bar{A}y}{I}$$

End of Solution

22. Which one of the following statements is correct for the rotating shafts transmitting power?

- (a) Lower the frequency of shaft lower will be the torque
- (b) Higher the frequency of shaft lower will be the torque
- (c) Frequency of the shaft does not influence the torque
- (d) Higher the frequency of shaft higher will be the torque

Ans. (b)

$$\text{Power} = \text{torque} \times W \quad (W = \text{angular frequency})$$

If power constant

$\uparrow W \rightarrow \downarrow \text{Torque}$

End of Solution

23. The maximum shear stress induced in a solid circular shaft of diameter 15 cm, when the shaft transmits 150 kW power at 180 rpm will be

- (a) 16 N/mm²
- (b) 14 N/mm²
- (c) 12 N/mm²
- (d) 10 N/mm²

Ans. (c)

$$\text{Power} = T \times W$$

$$150 \times 10^3 = T \times \frac{2\pi 180}{60}$$

$$T = 7957.74 \text{ N-m}$$

$$\tau_{\max} = \frac{16T}{\pi D^3} = \frac{16 \times (7957.74 \times 10^3)}{\pi (150)^3}$$

$$\tau_{\max} = 12 \text{ MPa}$$

End of Solution

24. A closely coiled helical spring made of 10 mm diameter steel wire has 15 coils of 100 mm mean diameter. The spring is subjected to an axial load of 100 N. For a modulus of rigidity of $8.16 \times 10^4 \text{ N/mm}^2$, the stiffness of the spring will be nearly

- (a) 5.9 N/mm
- (b) 6.8 N/mm
- (c) 7.7 N/mm
- (d) 8.8 N/mm

General Studies & Engineering Aptitude Batches for ESE 2020 (Preliminary Examination)



MADE EASY
India's Best Institute for IES, GATE & PSUs

Syllabus Covered

1. Current issues of national and international importance relating to social economic and industrial development.
2. Engineering Aptitude covering Logical reasoning and Analytical ability.
3. Engineering Mathematics and Numerical Analysis.
4. General Principles of Design, Drawing, Importance of Safety.
5. Standards and Quality practices in production, construction, maintenance and services.
6. Basic of Energy and Environment : Conservation, Environmental pollution and degradation, Climate Change, Environmental impact assessment.
7. Basic of Project Management.
8. Basics of Material Science and Engineering.
9. Information and Communication Technologies (ICT) based tools and their applications in Engineering such as networking, e-governance and technology based education.
10. Ethics and values in engineering profession.

Course Duration

Regular Batches : 2.5 months
Weekend Batches : 4 months

Timings

Regular : 6 to 7 days a week and 4-6 hours a day
Weekend : Sat, Sun & public holiday, 8 hours each day

Teaching Hours

250-300 hours

Batch Type	Commencing Dates	Venue	Timing
Regular Batch	20 th Feb, 2019	Ghitorni (Delhi)	8:00 AM to 12:00 PM
Weekend Batch	24 th Feb, 2019	Ghitorni (Delhi)	8:00 AM to 5:00 PM
Weekend Batch	24 th Feb, 2019	Noida Centre	8:00 AM to 5:00 PM

Fee Structure

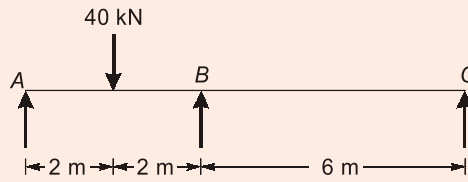
Non-MADE EASY Students	Ex. MADE EASY Students Enrolled in Postal, Rank Improvement, Mains, GS, GATE, GATE + ESE Batches
<p>₹ 25,000</p> <ul style="list-style-type: none"> • GS & Engg Aptitude Books will be issued. 	<p>₹ 18,000</p> <ul style="list-style-type: none"> • GS & Engg Aptitude Books will NOT be issued. • Interested students can avail books by paying the fee of Rs. 2,000/-

Corporate office : 44-A/1, Kalu Sarai, New Delhi - 1100 16 ☎ 011-45124612, 9958995830

Noida office : D-28, Sector - 63, Noida, Uttar Pradesh - 201301 ☎ 0120-6524612, 08860378009

**ADMISSION
OPEN**

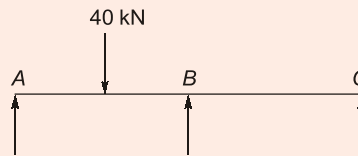
29. A continuous beam with uniform flexural rigidity is shown in the figure



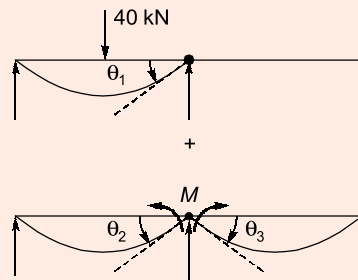
The moment at B is

- (a) 18 kNm (b) 16 kNm
(c) 14 kNm (d) 12 kNm

Ans. (d)



Considering BM_B as redundant



$$\theta_1 + \theta_2 + \theta_3 = 0$$

$$\Rightarrow \frac{PL^2}{16EI} + \frac{ML}{3EI} + \frac{ML}{3EI} = 0$$

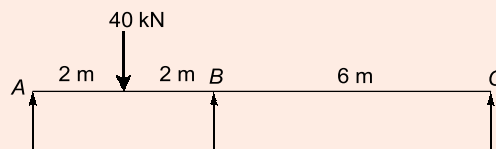
$$\Rightarrow \frac{P \times 4^2}{16} + \frac{M \times 4}{3} + \frac{M \times 6}{3} = 0$$

$$\Rightarrow \frac{P \times 3}{10} = -M$$

$$\Rightarrow M = -12 \text{ kNm}$$

Negative sign represents hogging bending moment.

Alternate Method



1. Distribution factor

Joint	Member	Relative stiffness (K)	ΣK	Distribution factor (DF) = $\frac{K}{\Sigma K}$
B	BA	$\frac{3}{4} \times \frac{I}{4} = \frac{3I}{16} = \frac{9I}{48}$	$\frac{15I}{48}$	0.6
	BC	$\frac{3}{4} \times \frac{I}{6} = \frac{3I}{24} = \frac{6I}{48}$		0.4

2. End moment distribution

Joint	A	B	C
DF	1	0.6 0.4	1
Fixed end moment (FEM)	-20	+20 0	0
Release A	+20		
Carryover moment (COM)		+10	
Net FEM	0	+30 0	0
Balancing B		-18 -12	
Final end moment	0	+12 -12	0

Moment at B = 12 kNm

End of Solution

30. The maximum shear stress across a circular section is

- (a) $\left(\frac{4}{3}\right)$ Average shear stress (b) $\left(\frac{3}{2}\right)$ Average shear stress
 (c) $\left(\frac{5}{4}\right)$ Average shear stress (d) $\left(\frac{9}{5}\right)$ Average shear stress

Ans. (a)

End of Solution

31. Which of the following statements are correct in respect of temperature effect on a load-carrying three-hinged arch?

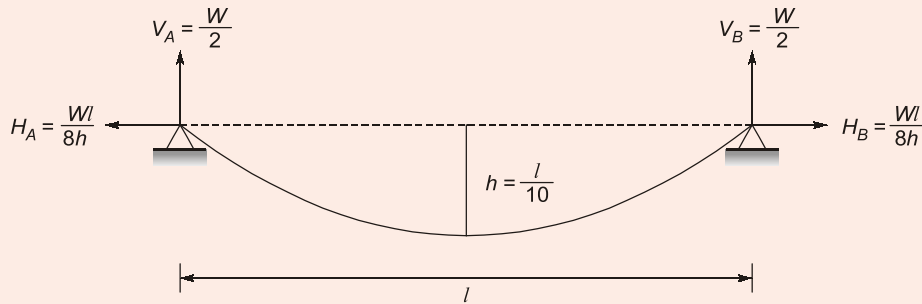
- No stresses are produced in a three-hinged arch due to temperature change alone.
 - There is a decrease in horizontal thrust due to rise in temperature.
 - There is an increase in horizontal thrust due to rise in temperature.
- (a) 1 and 2 only (b) 1 and 3 only
 (c) 2 only (d) 3 only

Ans. (a)

End of Solution

35. The maximum possible span for a cable supported at the ends at the same level (assuming it to be in a parabolic profile) allowing a central dip of $\frac{1}{10}$ of the span with permissible stress of 150 N/mm^2 (where the steel weighs 78000 N/m^3) will be nearly
- (a) 1270 m (b) 1330 m
(c) 1388 m (d) 1450 m

Ans. (c)



Since only self weight of cable is to be considered exact length of cable is used for calculation.

Considering maximum span = l

$$\text{Length of cable} = L = l \left[1 + \frac{8}{3} \left(\frac{h}{l} \right)^2 \right]$$

$$\Rightarrow L = l \left[1 + \frac{8}{3} \left(\frac{l/10}{l} \right)^2 \right] = \frac{308}{300} l$$

Let cross-sectional area of cable = $A \text{ mm}^2$

$$\text{Total weight of cable} = W = \frac{A}{1000^2} \times 78000 \times \frac{308}{300} l = 0.08008 Al$$

$$\text{Now, Vertical reaction} = V_A = \frac{W}{2}$$

$$\text{Horizontal reaction} = \frac{Wl}{8h} = \frac{W \times l}{8 \times \frac{l}{10}} = \frac{5W}{4}$$

$$\text{Since, Maximum stress} = \frac{T_{\max}}{A}$$

$$\Rightarrow \sigma_{\max} = \frac{\sqrt{V_A^2 + H_A^2}}{A} = \frac{\sqrt{\left(\frac{W}{2}\right)^2 + \left(\frac{5W}{4}\right)^2}}{A}$$

$$\Rightarrow \sigma_{\max} = \frac{1.35W}{A} = \frac{1.35 \times 0.08008 Al}{A}$$

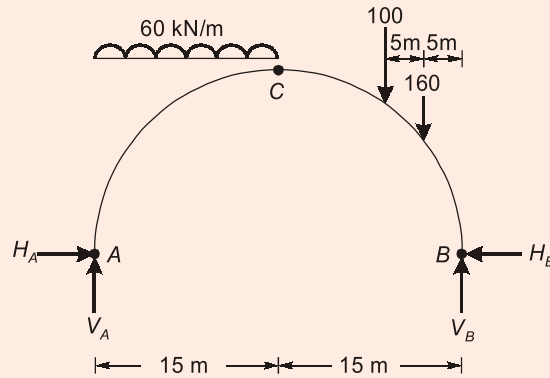
$$\Rightarrow 150 = 1.35 \times 0.08008 \times l$$

$$l = 1387.5 \text{ m}$$

End of Solution

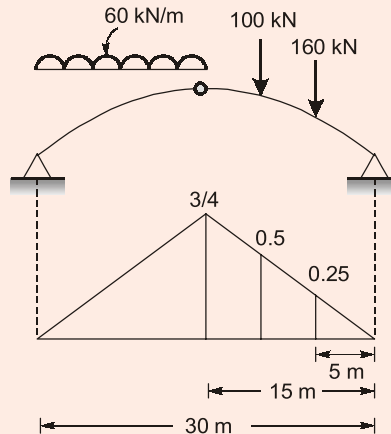
36. A three-hinged arch has a span of 30 m and a rise of 10 m. The arch carries UDL of 60 kN/m on the left half of its span. It also carries two concentrated loads of 100 kN and 160 kN at 5 m and 10 m from the right end. The horizontal thrust will be nearly
- (a) 446 kN (b) 436 kN
(c) 428 kN (d) 418 kN

Ans. (c)



$$\begin{aligned} \Rightarrow V_A \times 30 - 60 \times 15 \times 22.5 - 100 \times 10 - 160 \times 5 &= 0 \\ \Rightarrow V_A &= 735 \text{ kN} \\ M_C &= 0 \text{ (LHS)} \\ \Rightarrow V_A \times 15 - 60 \times 15 \times 7.5 - H_A \times 10 &= 0 \\ \Rightarrow 735 \times 15 - 60 \times 15 \times 7.5 - H_A \times 10 &= 0 \\ \Rightarrow H &= 427.5 \text{ kN} \\ &\approx 428 \text{ kN} \end{aligned}$$

Alternate solution:



$$\frac{L}{4h} = \frac{30\text{m}}{4 \times 10\text{m}} = \frac{3}{4}$$

$$\begin{aligned} H &= 60 \times \left(\frac{1}{2} \times 15 \times \frac{3}{4} \right) + (100 \times 0.5) + (160 \times 0.25) \\ &= 337.5 + 50 + 40 = 427.5 \text{ kN} \end{aligned}$$

End of Solution

37. An unstable vibratory motion due to combined bending and torsion which occurs in flexible plate like structures is called
- (a) Galloping (b) Owalling
(c) Flutter (d) Oscillation

Ans. (c)

End of Solution

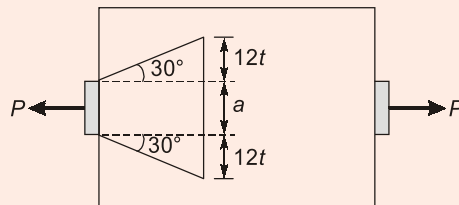
38. A propped cantilever beam of span l and constant plastic moment capacity M_p carries a concentrated load at mid-span. The load at collapse will be
- (a) $\frac{2M_p}{l}$ (b) $\frac{4M_p}{l}$
(c) $\frac{6M_p}{l}$ (d) $\frac{8M_p}{l}$

Ans. (c)

End of Solution

39. A steel plate is subjected to tension. The tensile force is applied over a width 'a' whereas the gross width of the plate is 'b'. The dispersion of the force from the point of application is at about 30° with the axis and extends to a maximum width of 12 times the thickness t of the plate. The effective width which comes into action will be
- (a) $2a + 12t$ (b) $a + 12t$
(c) $a + 24t$ (d) $2a + 24t$

Ans. (c)



Effective width, $b_f = a + 2 \times 12t = a + 24t$

End of Solution

40. A wind brace is to be provided between two columns spaced at 5 m, at an inclination of 30° with the horizontal, to resist a tension of 320 kN developed by a wind force. The effective area required will be nearly (considering 150 N/m^2 as a relevant factor).
- (a) 1670 mm^2 (b) 1640 mm^2
(c) 1600 mm^2 (d) 1570 mm^2

Ans. (*)

End of Solution

RANK IMPROVEMENT BATCHES for ESE 2020 & GATE 2020 at Delhi Centre



MADE EASY
India's Best Institute for IES, GATE & PSUs

Rank Improvement Batches are designed with a motive to provide more practice to students by focusing on numerical solving. Supplemented with exclusive workbooks having variety of questions, makes these batches a complete package to help repeater aspirants who have taken classroom coaching or prepared themselves for these exams to fill the gap and get ready for the next.

FEATURES :

- Comprehensive problem solving sessions
- Smart techniques to solve problems
- Techniques to improve accuracy & speed
- Systematic & cyclic revision of all subjects
- Doubt clearing sessions
- Weekly class tests for performance improvement
- Inclusive of interview guidance for PSUs
- Specially designed workbooks for technical subjects

ELIGIBILITY :

- Ex. MADE EASY students who have undergone classroom coaching from any centre of MADE EASY
- Students who have undergone classroom coaching from any other institute
- Qualified in GATE exam
- Qualified in ESE (Pre/Mains) written exam
- Qualified in any PSU exam
- M. Tech from reputed colleges

Streams	Timing	Date	Venue
CE	5:00 PM to 9:00 PM	20 th May, 2019	Saket-2
ME	5:00 PM to 9:00 PM	20 th May, 2019	Ghitorni
EE	5:00 PM to 9:00 PM	21 st May, 2019	Lado Sarai-1
EC	5:00 PM to 9:00 PM	21 st May, 2019	Lado Sarai-2

SYLLABUS COVERED

Complete GATE syllabus &
Technical syllabus of ESE

COURSE DURATION

Approximately 5 months
450-475 teaching hours

CLASS TIMING

5-6 days a week
4 hours a day

Note : These batches will be focusing on solving problems and doubt clearing sessions. Therefore if a student is weak in basic concepts & fundamentals then he/she is recommended to join regular classroom course.

Corporate office : 44-A/1, Kalu Sarai, New Delhi - 1100 16 ☎ 011-45124612, 9958995830

ADMISSION OPEN

☎ 011-45124612 | 🌐 www.madeeasy.in

41. A beam column for a non-sway column in a building frame is subjected to a factored axial load of 500 kN, factored moment at bottom of column of 45 kNm. For ISHB 200, the values are $A = 4750 \text{ mm}^2$, $\gamma_y = 45.1$, $h = 200 \text{ mm}$, $b = 200 \text{ mm}$, $b_f = 9 \text{ mm}$ and the effective length is $0.8 L$. Its buckling load will be
- (a) 910 kN (b) 930 kN
(c) 950 kN (d) 980 kN

Ans. (c)

Buckling load or effective axial load ' P_e ' as suggested by Yura is given by

$$P_e = P + \frac{2M}{d} = 500 + \frac{2 \times 45}{0.2 \text{ m}} = 950 \text{ kN}$$

$$(d = \text{depth of beam section} = 200 \text{ mm} = 0.2 \text{ m})$$

End of Solution

42. Which of the following assumptions are correct for ideal beam behaviour?
1. The compression flange of the beam is restrained from moving laterally.
 2. The tension flange of the beam is restrained from moving laterally.
 3. Any form of local buckling is prevented.
- (a) 2 and 3 only (b) 1 and 3 only
(c) 1 only (d) 3 only

Ans. (b)

End of Solution

43. In which one of the following industrial roofing contexts, is the loading carried by the combination of pure flexure and flexure due to shear induced by the relative deformation between the ends of the top and bottom chord members?
- (a) Vierendeel girders (b) Scissors girders
(c) Lenticular girders (d) Mansard girders

Ans. (a)

End of Solution

44. Bearing stiffeners are provided
- (a) At the ends of plate girders
(b) At the ends of plate girder and on both faces of the web
(c) At the ends of plate girder and only on one face of the web
(d) At the points of concentrated loads, to protect the web from the direct compressive loads

Ans. (d)

End of Solution

45. If the cost of purlins/unit area is p and the cost of roof covering/unit area is r , then cost of trusses/unit area l for an economical spacing of the roof trusses will be
- (a) $p + r$ (b) $2p + r$
(c) $p + 2r$ (d) $2p + 2r$

Ans. (b)

End of Solution

46. A welded plate girder of span 25 m is laterally restrained throughout its length. It has to carry a load of 80 kN/m over the whole span besides its weight. If $K = 200$ and $f_y = 250$ MPa, the thickness of web will be nearly
- (a) 10 mm (b) 14 mm
(c) 16 mm (d) 20 mm

Ans. (a)

Economical depth of plate girder is given by

$$d = 3 \sqrt{\frac{MK}{f_y}}$$

$$M = \text{Maximum bending moment} = \frac{wl^2}{8} = \frac{80 \times 25^2}{8} = 6250 \text{ kNm}$$

$$k = 200 \left(= \frac{d}{t_w} \right)$$

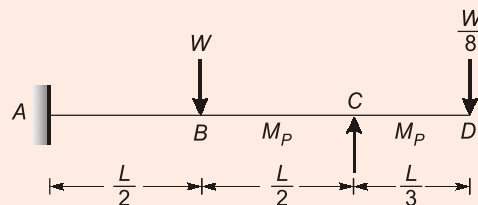
$$d = 3 \sqrt{\frac{6250 \times 10^6 \times 200}{250}} = 1710 \text{ mm}$$

$$\text{Thickness of web, } t_w = \frac{d}{k} = \frac{1710}{200} = 8.55 \text{ mm}$$

$$\text{So, provide, } t_w = 10 \text{ mm}$$

End of Solution

47. A propped cantilever ABCD is loaded as shown in figure. If its is of uniform cross-section, the collapse load of the beam will be nearly



- (a) $6.5 \frac{M_P}{L}$ (b) $5.6 \frac{M_P}{L}$
(c) $4.7 \frac{M_P}{L}$ (d) $3.8 \frac{M_P}{L}$

49. Fatigue in RCC beams will not be a problem if the number of cycles is less than
 (a) 20000 (b) 25000
 (c) 30000 (d) 35000

Ans. (*)

End of Solution

50. The desired characteristic strength of a mix is 20 N/mm². The standard deviation is 4 N/mm² for 150 mm size of concrete cubes; and $K = 1.645$. The average strength of the cubes will be nearly
 (a) 38.2 N/mm² (b) 32.4 N/mm²
 (c) 26.6 N/mm² (d) 22.8 N/mm²

Ans. (c)

Average strength of 4 cubes for quality control at site

$$\begin{aligned} f_{av} &= f_{ck} + 0.825\sigma \\ &= 20 + 0.825 \times 4.0 \\ &= 23.30 \text{ N/mm}^2 \end{aligned} \quad \text{(Not matching with any answer)}$$

Average strength of cubes at the time of design mix

$$\begin{aligned} &= f_{ck} + 1.645 \times \sigma \\ &= 20 + 1.645 \times 4 \\ &= 26.58 \text{ N/mm}^2 \\ &\simeq 26.6 \text{ N/mm}^2 \text{ (say)} \end{aligned}$$

End of Solution

51. A circular column is subjected to an un-factored load of 1600 kN. The effective length of the column is 3.5 m, the concrete is M25, and the value of $\rho_g = \frac{A_{sc}}{A_g} = 2\%$ for Fe415 steel. The design diameter of the column will be nearly
 (a) 446 mm (b) 432 mm
 (c) 424 mm (d) 410 mm

Ans. (a)

$$P_u = 1.5 \times 1600 = 2400 \text{ kN}$$

Considerably,

$$P_u = 0.40 f_{ck} \cdot A_c + 0.67 f_y \cdot A_{sc}$$

$$2400 \times 10^3 = 0.40 \times 25 \times \left[\frac{\pi}{4} (D)^2 - A_{sc} \right] + 0.67 \times 415 \times A_{sc}$$

$$2400000 = 0.40 \times 25 \times 0.98 \times \frac{\pi}{4} D^2 + 0.67 \times 415 \times 0.02 \times \frac{\pi}{4} (D)^2$$

$$D = 446 \text{ mm}$$

53. The recommended imposed load on staircase in residential buildings as per IS 875 is
(a) 5.0 kN/m² (b) 3.0 kN/m²
(c) 1.5 kN/m² (d) 1.3 kN/m²

Ans. (b)
3.0 kN/m² For residential building on staircase
(As per Table - 1/P-7/ IS 875/ P-2)

End of Solution

54. A 230 mm brick masonry wall is to be provided with a reinforced concrete footing on site having soil with safe bearing capacity of 120 kN/m², unit weight of 17.5 kN/m³ and angle of shearing resistance of 30°. The depth of footing will be nearly
(a) 0.8 m (b) 0.7 m
(c) 0.6 m (d) 0.5 m

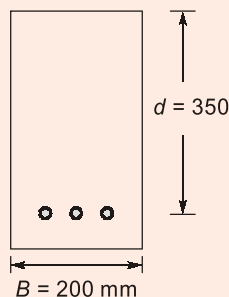
Ans. (a)

$$\begin{aligned}\text{Minimum depth of footing} &= \frac{P}{\gamma} \left(\frac{1 - \sin \phi}{1 + \sin \phi} \right)^2 \\ &= \frac{125}{17.5} \times \left(\frac{1}{3} \right)^2 = 0.794 \text{ m} \\ &\simeq 0.80 \text{ m (say)}\end{aligned}$$

End of Solution

55. A rectangular beam 200 mm wide has an effective depth of 350 mm. It is subjected to a bending moment of 24,000 Nm. The permissible stresses are $c = 5 \text{ N/mm}^2$, $t = 140 \text{ N/mm}^2$; and m is 18. The required area of tensile reinforcement will be
(a) 688 mm² (b) 778 mm²
(c) 864 mm² (d) 954 mm²

Ans. (b)



$$\begin{aligned}\text{Bending moment} &= 24 \text{ kN-m} \\ c &= 5 \text{ N/mm}^2 \\ t &= 140 \text{ N/mm}^2 \\ K &= \frac{mc}{t + mc} = \frac{18 \times 5}{140 + 18 \times 5} = 0.39\end{aligned}$$

$$j = \left(1 - \frac{K}{3}\right) = 0.87$$

$$Q = \frac{1}{2} c \cdot j \cdot K = \frac{1}{2} \times 5 \times 0.87 \times 0.39 = 0.85$$

$$MR_{bal} = 0.85 \times 200 \times 350^2 \\ = 20.83 \text{ kN-m}$$

Over reinforced section is required as $BM > MR_{bal}$

For over reinforced section,

$$x_a > x_c \\ c_a = \sigma_{cbc} \\ t_a < \sigma_{st}$$

Equating

$$BM = B \cdot x_a \cdot \frac{c_a}{2} \cdot \left(d - \frac{x_a}{3}\right)$$

$$24 \times 10^6 = 200 \times x_a \times \frac{5}{2} \times \left(350 - \frac{x_a}{3}\right)$$

$$48000 = 350x_a - \frac{x_a^2}{3}$$

$$\frac{x_a^2}{3} - 350x_a + 48000 = 0$$

$$x_a = 162.2 \text{ mm}$$

$$c_a = 5 \text{ N/mm}^2$$

$$\frac{c_a}{x_a} = \frac{t_a / m}{d - x_a}$$

$$t_a = \frac{c_a \times m \times (d - x_a)}{x_a}$$

$$= \frac{5 \times 18 \times (350 - 162.2)}{162.2} = 104.2 \text{ N/mm}^2$$

$$A_{st} = \frac{BM}{t_a \left(d - \frac{x_a}{3}\right)}$$

$$= \frac{24 \times 10^6}{104.2 \times \left(350 - \frac{162.2}{3}\right)} = 778 \text{ mm}^2$$

End of Solution



MADE EASY

India's Best Institute for IES, GATE & PSUs

RPSC Mains Batches

RAJASTHAN PUBLIC SERVICE COMMISSION

Assistant Engineer Examination, 2018
at Jaipur Centre

Batches Commencing from **17th Jan, 2019**

Exam Structure

G.S. + Hindi

- Paper-I
Hindi (100 Marks - 3 Hours)
- Paper-II
Social aspect of Engineering (100 Marks - 3 Hours)

Technical Syllabus

- Civil Engineering
Paper-I (200 Marks - 3 Hours)
- Civil Engineering
Paper-II (200 Marks - 3 Hours)

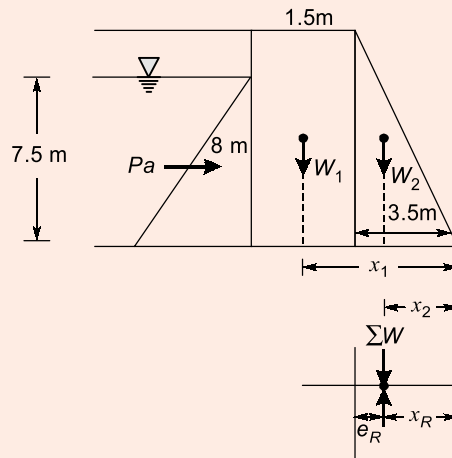
FEE STRUCTURE

SUBJECTS	TOTAL HOURS	NON-MADE EASY STUDENTS	EX-MADE EASY STUDENTS
G.S. + Hindi	225-250 Hours	₹19,500	₹15,500
Tech + G.S. + Hindi	700-750 Hours	₹52,500	₹43,500

Admission Open

MADE EASY JAIPUR : AB - 559, Kings Road, Nirman Nagar
Ph : 0141-4024612, 09166811228 | www.madeeasy.in

Ans. (b)



$$W_1 = 1.5 \times 8.0 \times 1.0 \times 22 = 264 \text{ kN}$$

$$x_1 = 5.0 - \frac{1.5}{2} = 4.25 \text{ m}$$

$$W_2 = \frac{1}{2} \times 3.5 \times 8.0 \times 22 = 308 \text{ kN}$$

$$x_2 = 3.5 \times \frac{2}{3} = 2.3333 \text{ m}$$

$$P_a = \frac{1}{2} \times \gamma \cdot H^2 = \frac{1}{2} \times 9.81 \times 7.5^2 = 275.91 \text{ kN}$$

$$h = \frac{1}{3} \times 7.5 = 2.50 \text{ m}$$

$$\Sigma W \cdot x_R = W_1 x_1 + W_2 x_2 - P_a h$$

$$x_R = \frac{(264 \times 4.25 + 308 \times 2.33333) - 275.91 \times 2.50}{264 + 308}$$

$$= 2.012 \text{ m}$$

$$e_R = \frac{5}{2} - 2.012 = 0.488 \text{ m}$$

$$\text{Maximum pressure} = \frac{\Sigma W}{A} \left(1 + \frac{6e_R}{B} \right)$$

$$= \frac{(264 + 308)}{5.0 \times 1.0} \left(1 + \frac{6 \times 0.488}{5.0} \right) = 181.39 \text{ kN/m}^2$$

End of Solution

61. A front-end loader on a given job moves a load of 1.5 m^3 of loose soil in one cycle consisting of loading-lifting-travelling-unloading-return trip-and-ready for next loading. If each cycle time is 1.2 minutes, the actual output will be
- (a) $75 \text{ m}^3/\text{hour}$ (b) $70 \text{ m}^3/\text{hour}$
(c) $65 \text{ m}^3/\text{hour}$ (d) $60 \text{ m}^3/\text{hour}$

67. A crew consisting of two carpenters and one helper can fix 10 m² of a slab form work in 8 hours and the hourly labour rate of a carpenter is ₹ 85 and for a helper is ₹ 69.50. An average hourly rate per worker of the crew will be nearly
- (a) ₹ 90 (b) ₹ 80
(c) ₹ 70 (d) ₹ 60

Ans. (b)

$$\text{rate of carpenter} = 85 \frac{\text{₹}}{\text{hr.}} \times 8 \times 2 = 1360 \text{ ₹}$$

$$\text{rate of helper} = 69.50 \times 8 = 556 \text{ ₹}$$

$$\therefore \text{Average hourly rate} = \frac{1360 + 556}{24} = 79.83 \simeq 80 \text{ ₹}$$

End of Solution

68. A project with the production cost of ₹ 100 crores, has 20,000 man-months as direct labour, of which 60% is non-productive time. The labour cost as estimated while tendering is 20% of project cost. If 15% of the wastage resulting from non-productive time is eliminated by using improved methods, the resulting saving in labour cost will be
- (a) 14.5% (b) 18.5%
(c) 22.5% (d) 26.5%

Ans. (c)

$$\text{Labour cost} = 20\% \text{ of ₹ 100 cr}$$

$$= ₹ 20 \text{ cr} \quad ₹ 8 \text{ cr (productive cost)}$$

$$₹ 12 \text{ cr (Non productive cost)}$$

$$\text{Cost saving} = 15\% \text{ of ₹ 12 cr} = ₹ 1.8 \text{ cr}$$

$$\Rightarrow \% \text{ Cost saving} = \frac{₹ 1.8 \text{ cr}}{₹ 8 \text{ cr}} \times 100 = 22.5\%$$

End of Solution

69. Consider the following data:
Work is carried out by a contractor employing labour with 25% overtime per day
Working for 5 days a week
Contractor peak manpower is 40 per day
Build-up period is 20%
Rundown period is 10%
Total effort in standard man days is 1200
The duration of work by Trapezoidal manpower distribution pattern will be
- (a) 5.5 weeks (b) 6.5 weeks
(c) 7.5 weeks (d) 8.5 weeks

Ans. (a)

According to trapezoidal distribution

$$\text{Activity duration, } d = \frac{\text{Total man days}}{0.85 P}$$

$$\Rightarrow d = \frac{1200}{0.85 \times 40} = 35.3 \text{ days}$$

Considering 25% overtime and 5 days a week.

$$\text{No. of weeks} = \frac{35.3}{1.25 \times 5} = 5.5 \text{ weeks}$$

End of Solution

70. A systematic measurement and evaluation of the way in which an organization manages its health and safety programme against a series of specific and attainable standards is called
- (a) Safety inspection (b) Safety audit
(c) Safety plan (d) Safety committee

Ans. (b)

End of Solution

71. On a construction project, the contractor, on an average, employed 100 workers with 50 hours working per week. The project lasted for 35 weeks and, during this period, 14 disabling injuries occurred. The injury-frequency rate will be (based on one lakh of man hours worked)
- (a) 5 (b) 5
(c) 7 (d) 8

Ans. (d)

$$\text{Total working hour} = 50 \times 35 \times 100 = 175000 \text{ hr}$$

$$\text{frequency of injury} = \frac{14}{175000} \times 100000 = 8$$

End of Solution

72. The graphical representations wherein long duration jobs are broken down to key segmental elements, wherein events are shown in chronological order without attention to logical sequencing, and wherein interdependencies between the events is not highlighted, is referred to as
- (a) CPM (b) Milestone chart
(c) GANTT chart (d) PERT

Ans. (b)

End of Solution

73. A ship weighs 127 MN. On filling the ship's boats on one side with water weighing 600 kN with the mean distance of the boats from the centre line of the ship being 10 m, the angle of displacement of the plumb line is $2^\circ 16'$. The metacentric height will be nearly (Take $\sin 2^\circ 16' = 0.04$, $\cos 2^\circ 16' = 0.9992$ and $\tan 2^\circ 16' = 0.04$)
- (a) 1.73 m (b) 1.42 m
(c) 1.18 m (d) 0.87 m

Ans. (c)

According to experimental method of determination of metacentric height

$$GM = \frac{wx}{W \tan \theta}$$

where, $w = 600 \text{ kN}$, $W = 127 \text{ MN} = 127 \times 10^3 \text{ kN}$, $\theta = 2^\circ 16''$, $x = 10 \text{ m}$

$$GM = \frac{600 \times 10}{127 \times 10^3 \tan 2^\circ 16''} = \frac{6000}{127 \times 10^3 \times 0.04} = 1.18 \text{ m}$$

End of Solution

74. For frictionless adiabatic flow of compressive fluid, the Bernoulli's equation with usual notations is

$$(a) \frac{k}{k-1} \frac{p_1}{w_1} + \frac{v_1^2}{2g} + z_1 = \frac{k}{k-1} \frac{p_2}{w_2} + \frac{v_2^2}{2g} + z_2 + h_L$$

$$(b) \frac{k}{k-1} \frac{p_1}{w_1} + \frac{v_1^2}{2g} + z_1 = \frac{k}{k-1} \frac{p_2}{w_2} + \frac{v_2^2}{2g} + z_2$$

$$(c) \frac{p_1}{w_1} + \frac{v_1^2}{2g} + z_1 + H_m = \frac{p_2}{w_2} + \frac{v_2^2}{2g} + z_2$$

$$(d) \frac{k}{k-1} \frac{p_1}{w_1} + \frac{v_1^2}{2g} + z_1 + H_m = \frac{p_2}{w_2} + \frac{v_2^2}{2g} + z_2 + h_L$$

Ans. (b)

As we know that, $\int \frac{dP}{\rho g} + \frac{V^2}{2g} + z = \text{constant}$... (i)

For a compressible flow, undergoing an adiabatic process

$$\frac{P}{\rho^k} = c \text{ (constant)}$$

$$dP = K \cdot C \cdot \rho^{k-1} \cdot d\rho$$

By equation (i)

$$\int \frac{K.C.\rho^{k-1}.d\rho}{\rho g} + \frac{V^2}{2g} + z = \text{constant}$$

$$\frac{KC}{g} \int \rho^{k-2} d\rho + \frac{V^2}{2g} + z = \text{constant}$$

$$\frac{K.C.\rho^{k-1}}{g(k-1)} + \frac{V^2}{2g} + z = \text{constant}$$

$$\frac{K.C.\rho^{k-1}}{g(k-1)} \cdot \frac{\rho}{\rho} + \frac{V^2}{2g} + z = \text{constant}$$

$$\frac{K}{K-1} \cdot \frac{C.\rho^k}{\rho.g} + \frac{V^2}{2g} + z = \text{constant} \quad (\because P = C.\rho^k)$$

$$\frac{K}{K-1} \cdot \frac{\rho}{\rho.g} + \frac{V^2}{2g} + z = \text{constant}$$

End of Solution



MADE EASY
India's Best Institute for IES, GATE & PSUs*

- ✓ Quality Teaching
- ✓ Comprehensive Study Material
- ✓ Well Planned Curriculum
- ✓ Professionally Managed

Announcing
NEW BATCHES
for **ESE 2020 & GATE 2020**
1 Yr/2Yrs CLASSROOM COURSES

... Early start ... Extra edge

- Suitable for college going, working professionals and passed out aspirants.
- For **Evening (Regular) Batches** classes will be held 6-7 days in a week for 3-4 hrs/day.
* Classes may be extended on weekends & public holidays.
- For **Morning (Regular) Batches** classes will be held 6-7 days in a week for 6 hrs/day.
- For **Weekend Batches** classes will be conducted on weekends and public holidays.
* Classes may be conducted on weekdays during semester breaks.

Batches Commencement Dates

	Delhi	Noida	Rest of India (Regular Batches)		
Weekend Batches	CE	12-Jan-2019	12-Jan-2019	Patna	25 th Feb'19
	ME	12-Jan-2019	12-Jan-2019	Lucknow	20 th Feb'19
	EE	13-Jan-2019	13-Jan-2019	Bhopal	14 th Jan'19
	EC	13-Jan-2019	13-Jan-2019	Indore	20 th Feb'19
	CS	19-Jan-2019		Pune	14 th Jan'19
Regular Batches	CE	15-Jan-2019, 14-Feb-2019		Hyderabad	17 th Feb'19
	ME	15-Jan-2019, 14-Feb-2019		Bhubaneswar	24 th Jan'19
	EE	17-Jan-2019, 18-Feb-2019		Kolkata	15 th Jan'19
	EC	17-Jan-2019		Jaipur	17 th Feb'19
	CS	16-May-2019			

Admission open

Corporate office : 44-A/1, Kalu Sarai, New Delhi - 1100 16 ☎ 011-45124612, 9958995830

Centres | Delhi | Hyderabad | Noida | Jaipur | Bhopal | Lucknow | Indore | Bhubaneswar | Pune | Kolkata | Patna
011-45124612 | 040-66774612 | 0120-6524612 | 0141-4024612 | 0755-4004612 | 09919111168 | 0731-4029612 | 09040299888 | 020-26058612 | 8981888880 | 0612-2356615

75. The phenomenon of generation of lift by rotating an object placed in a free stream is known as
- (a) Coanda effect (b) Magnus effect
(c) Scale effect (d) Buoyancy effect

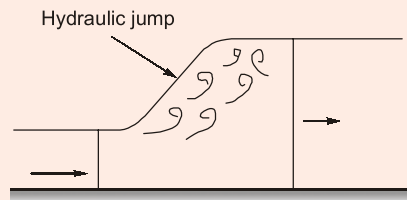
Ans. (b)

End of Solution

76. Which of the following assumptions is/are made in the analysis of hydraulic jump?
1. It is assumed that before and after jump formation the flow is essentially two-dimensional and that the pressure distribution is hydrostatic.
 2. The length of the jump is small so that the losses due to friction on the channel floor are small and hence neglected.
 3. The channel floor is horizontal or the slope is so gentle that the weight component of the water mass comprising the jump is very high.
- (a) 1 only (b) 2 only
(c) 3 only (d) 1, 2 and 3

Ans. (b)

Before and after the jump formation, the flow is essentially one dimensional.



The channel floor is horizontal or the slope is so gentle that the weight component of the water mass comprising the jump is negligibly small.

End of Solution

77. Water is to be pumped out of a deep well under a total head of 95 m. A number of identical pumps of design speed 1000 rpm and specific speed 900 rpm with a rated capacity of 150 l/s are available. The number of pumps required will be
- (a) 1 (b) 3
(c) 5 (d) 7

Ans. (b)

$$H_{\text{total}} = 95 \text{ m}, N = 1000 \text{ rpm}, N_s = 900, Q = 150 \text{ L/s}$$

$$N_s = \frac{N \sqrt{Q}}{H_m^{3/4}}$$

$$900 = \frac{1000 \sqrt{150}}{H_m^{3/4}}$$

$$H_m = 32.49 \text{ m}$$

$$\text{No. of pumps} = \frac{H_{\text{total}}}{H_m} = \frac{95}{32.49} = 2.92 \approx 3$$

End of Solution

78. Consider the following data from a test on Pelton wheel?

Head at the base of the nozzle = 32 m

Discharge of the nozzle = 0.18 m³/s

Area of the jet = 7500 mm²

Power available at the shaft = 44 kW

Mechanical efficiency = 94%

The power lost in the nozzle will be nearly

- (a) 3.9 kW (b) 4.7 kW
(c) 3.5 kW (d) 2.3 kW

Ans. (b)

Power at the base of nozzle = $\dot{m}.g.H$

$$= \rho.Q. g. H$$

$$= (10^3)(0.18)(9.81)(32) = 56.51 \text{ kW}$$

$$V_1 = \frac{Q}{a} = \frac{0.18}{7500 \times 10^{-6}}$$

Power at the exit of nozzle = $\frac{1}{2}\dot{m}V_1^2$

$$= \frac{1}{2}\rho QV_1^2$$

$$= \frac{1}{2}(10^3)(0.18)(24)^2$$

$$= 51.84 \text{ kW}$$

$$= 24 \text{ m/s}$$

Power lost in the nozzle = 56.51 – 51.84 = 4.67 \simeq 4.7 kW

End of Solution

79. A certain hydropower plant utilizes the flow as it occurs, without any provision for storage. It is premised that a defined minimum dry weather flow is available. Such a plant is classified as

- (a) Diverted-flow plant (b) Pooled storage plant
(c) Base-load plant (d) Run-of-river plant

Ans. (d)

End of Solution

80. Two turbo-generators, each of capacity 25,000 kW, have been installed at a hydel power station. The load on the hydel plant varies from 15,000 kW to 40,000 kW. The total installed plant capacity and the load factor are nearly

- (a) 40,000 kW and 68.8% (b) 50,000 kW and 68.8%
(c) 40,000 kW and 62.3% (d) 50,000 kW and 62.3%

Ans. (b)

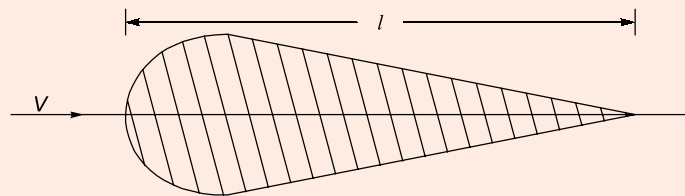
$$\begin{aligned} \text{Load factor} &= \frac{\text{Average load over a certain period}}{\text{Peak load during that period}} \\ &= \frac{15,000+40,000}{40,000} \\ &= 0.6875 \end{aligned}$$

i.e. 68.75%

Since two turbo-generators, each of capacity 25,000 kW have been installed. So total installed plant capacity = $2 \times 25,000 = 50,000$ kW.

End of Solution

81. An airfoil is a streamlined body as shown in the figure below. Because of the streamlining of the body, the separation occurs only at the extreme rear of the body, resulting in



- (a) A very high pressure drag
- (b) A small wake and consequently small pressure drag
- (c) A moderate pressure drag
- (d) No pressure drag

Ans. (b)

End of Solution

82. A plate 0.025 mm distant from a fixed plate moves at 60 cm/s and requires a force of 0.2 kgf/m^2 to maintain this speed. The dynamic viscosity of the fluid between the plates will be nearly

- (a) $9.2 \times 10^{-10} \text{ kgfs/cm}^2$
- (b) $8.3 \times 10^{-10} \text{ kgfs/cm}^2$
- (c) $7.4 \times 10^{-10} \text{ kgfs/cm}^2$
- (d) $6.5 \times 10^{-10} \text{ kgfs/cm}^2$

Ans. (b)



$$\frac{F}{A} = 0.2 \text{ kgf/m}^2 = \frac{0.2}{10^4} \text{ kgf/cm}^2$$

84. A double-acting reciprocating pump having piston area 0.1 m^2 has a stroke 0.30 m long. The pump is discharging 2.4 m^3 of water per minute at 45 rpm through a height of 10 m . The slip of the pump and power required to drive the pump will be nearly
- (a) $0.005 \text{ m}^3/\text{s}$ and 4.8 kW (b) $0.003 \text{ m}^3/\text{s}$ and 4.8 kW
(c) $0.005 \text{ m}^3/\text{s}$ and 4.4 kW (d) $0.003 \text{ m}^3/\text{s}$ and 4.4 kW

Ans. (c)

$$\text{Piston area } (A) = 0.1 \text{ m}^2$$

$$\text{Stroke } (L) = 0.3 \text{ m}$$

$$Q_{\text{actual}} = \frac{2.4}{60} \text{ m}^3/\text{s}$$

$$N = 45 \text{ rpm}$$

$$H = h_s + h_d = 10 \text{ m}$$

$$Q_{\text{theo}} = \frac{2ALN}{60} \text{ m}^3/\text{s}$$

$$= \frac{2(0.1)(0.3)(45)}{60} \text{ m}^3/\text{s}$$

$$= \frac{2.7}{60} \text{ m}^3/\text{s}$$

$$\text{Slip} = Q_{\text{Theo}} - Q_{\text{Act}}$$

$$= \frac{2.7}{60} - \frac{2.4}{60} = 0.005 \text{ m}^3/\text{s}$$

$$\text{Power required} = \dot{m} \cdot g \cdot H = \rho \cdot Q_{\text{theo}} \cdot g \cdot H$$

$$= (10^3) \left(\frac{2.7}{60} \right) (9.81)(10) = 4.41 \text{ kW}$$

End of Solution

85. In intensity-duration analysis by Sherman, the intensity of rainfall i is represented as

(a) $\frac{b^n}{(t+a)}$

(b) $\frac{a^n}{(t+b)^n}$

(c) $\frac{(a+t)^n}{b}$

(d) $\frac{a}{(t+b)^n}$

where t is time and a, b, n are constants for the area.

Ans. (d)

End of Solution

88. The coefficient of transmissibility T for a confined aquifer can be determined by a pumping-out test together with other relevant observations. The applicable formula is (where Q = discharge, and ΔS = Difference in drawdowns in two wells)

- (a) $\frac{Q}{2.72\Delta S}$ (b) $\frac{Q}{1.72\sqrt{\Delta S}}$
(c) $\frac{Q}{2.72}\Delta S$ (d) $\frac{Q}{2.72}\sqrt{\Delta S}$

Ans. (a)

Discharge from confined aquifer using Thiem's theory

$$Q = \frac{2\pi kH(s_1 - s_2)}{2.303 \log_{10}(r_2/r_1)}$$

Assuming, $r_2 = 10 r_1$

$$Q = \frac{2\pi T \Delta S}{2.303 \log_{10} 10} = \frac{2\pi T \Delta S}{2.303}$$

$$T = \frac{Q}{\frac{2.303 \Delta S}{2\pi}}$$

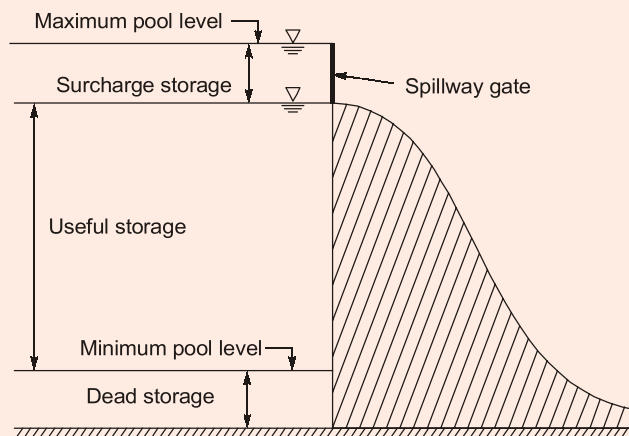
$$\Rightarrow T = \frac{Q}{2.72 \Delta S}$$

End of Solution

89. The volume of water below the minimum pool level in a reservoir is known as

- (a) Useful storage (b) Surcharge storage
(c) Dead storage (d) Bank storage

Ans. (c)



End of Solution

MADE EASY

National Scholarship Test

For ESE 2020 & GATE 2020



Scholarship

worth

₹

5

Crores

Scholarship applicable on batches commencing between April 2019 to July 2019.

Talent and aspiration is always an invincible combination. But if these two are facing disability to prosper due to unfavourable economic conditions then achieving academic goals is like chasing rainbows.

If you are one amongst such talented aspirants who dream about Engineering Services, PSUs and IITs but economic condition is a hurdle in the way of your dreams. MADE EASY is taking an initiative to turn this stumbling block to building block by giving scholarship for coaching guidance and thereby assisting all such students in accomplishing their dreams.

MADE EASY is announcing scholarship worth Rs. 5 Crores for all students who wish to enroll in classroom programmes for ESE -2020 and GATE-2020.

Category	Scholarship % in Tuition fee
A	100%
B	75%
C	50%
D	25%
E	10%

Test Pattern & Syllabus

National Scholarship Test is objective type offline test.

Students can opt either TECHNICAL BASED PAPER or APTITUDE BASED PAPER to appear for NST.

Total Marks : 100 | Total Questions : 50 Q | Time Duration : 1 hour | Per Question : 2 marks | Negative Marking : 0.66 marks

Option 1 TECHNICAL BASED PAPER : SYLLABUS

CIVIL	MECHANICAL	ELECTRICAL	ELECTRONICS	COMPUTER SCIENCE
SOM : 8Q	Thermodynamics : 6Q	Networks : 8Q	Networks : 8Q	TOC : 8Q
RCC : 8Q	HMT : 6Q	Control Systems : 8Q	Control Systems : 8Q	Algorithm : 8Q
Soil Mechanics : 8Q	FM : 6Q	Electrical Machines : 8Q	EDC : 6Q	Operating Systems : 8Q
Environmental : 8Q	Production : 10Q	Power Systems : 8Q	Analog Electronics : 8Q	DBMS : 8Q
FM : 8Q	Industrial : 6Q	Measurements : 6Q	Digital Electronics : 6Q	Computer Networks : 6Q
Highway : 5Q	SOM : 8Q	Analog Electronics : 6Q	Communications : 8Q	Digital Electronics : 6Q
Survey : 5Q	TOM : 8Q	Digital Electronics : 6Q	Signal & Systems : 6Q	Compiler Designs : 6Q

Option 2 APTITUDE BASED PAPER : SYLLABUS

Engineering Mathematics : 20 Q

Reasoning & Aptitude : 20 Q

General English : 10 Q



Date of Test : 10th Mar, 2019

Last date to register : 25th Feb, 2019



Register online at :
www.madeeasy.in

Helpline :

☎ 011-45124612 | ✉ nst@madeeasy.in

90. Depending upon the source from which the water is drawn, flow irrigation can be sub-divided into
1. River canal irrigation
 2. Reservoir or tank irrigation
 3. Combined storage and lift irrigation
 4. Combined storage and diversion irrigations
- Which of the above designations are relevant?
- (a) 1, 2 and 3 only (b) 1, 2 and 4 only
(c) 1, 3 and 4 only (d) 2, 3 and 4 only

Ans. (b)

Flow irrigation is that type of irrigation in which the supply of irrigation water available is at such a level that it is conveyed on to the land by gravity flow. Examples are river canal irrigation reservoir or tank irrigation, combined storage and diversion irrigation under gravity flow.

End of Solution

91. Consider the following data
- Root zone depth = 2 m
Existing water content = 5%
Dry density of soil = 15 kN/m³
Water applied to the soil = 500 m³
Water loss due to evaporation and deep percolation = 10%
Area of plot = 1000 m²
The field capacity of the soil will be nearly
- (a) 16.8% (b) 17.7%
(c) 18.8% (d) 19.7%

Ans. (d)

$$\text{Depth of water added into the soil after removing 10\% losses} = \frac{(500 \times 0.9) \text{ m}^3}{1000 \text{ m}^2} = 0.45 \text{ m}$$

$$d_w = \frac{\gamma_d}{\gamma_w} \times d \times (F.C. - \text{Existing moisture})$$

$$\begin{aligned} F.C. &= 0.14715 + 0.05 \\ &= 0.19715 \end{aligned}$$

or, F.C. \approx 19.715%

Note : If $\gamma_w = 10 \text{ kN/m}^3$ is taken, then it can be solved without calculator and answer will be F.C. = 20% = 19.7%

93. Consider the following statements with respect to weir under discussion:
1. Its design corresponds to soft sandy foundation.
 2. The difference in weir crest and downstream river bed may not exceed 3 m.
 3. When water passes over it, the longitudinal location of the formation of a hydraulic jump is variable.

This weir is of the type

- (a) Vertical drop weir (b) Masonry or concrete sloping weir
(c) Dry stone slope weir (d) Parabolic weir

Ans. (b)

Weirs constructed of masonry or concrete with sloping glacis are usually used now a days and their design is based upon modern concepts of sub-surface flow (Khosla's theory). Sheet piles of sufficient lengths are driven at the ends of upstream and downstream floor. The hydraulic jump is formed on the downstream sloping glacis so as to dissipate the energy of the flowing water.

This type of weir is exclusively used on permeable foundations (sandy soil). These are provided with a low crest with the differences in weir crest and d/s river not exceeding 3 m usually.

End of Solution

94. Consider the following data while designing an expansion transition for a canal by Mitra's method:

Length of flume = 16 m

Width of throat = 9 m

Width of canal = 15 m

If B_x is the width at any distance x from the flumed section, the values of B_x at $x = 8$ m and at $x = 16$ m are nearly

- (a) 10.8 m and 15 m (b) 11.3 m and 15 m
(c) 10.8 m and 13 m (d) 11.3 m and 13 m

Ans. (b)

B_x is given by

$$B_x = \frac{B_n \times B_f \times L_f}{B_n L_f - x(B_n - B_f)}$$

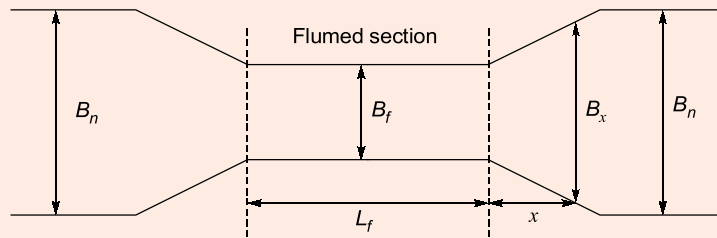
B_n - normal width of canal

B_f - width of throat of canal

L - length of flume = 16 m

$$B_x(x = 8\text{m}) = \frac{15 \times 9 \times 16}{15 \times 16 - 8 \times (15 - 9)} = 11.25 \text{ m}$$

$$B_x(x = 16\text{m}) = \frac{15 \times 9 \times 16}{15 \times 16 - 16 \times (15 - 9)} = 15 \text{ m}$$



End of Solution

95. Consider the following data for a drain:
 $L = 50$ m, $a = 10$ m, $b = 10.3$ m and $k = 1 \times 10^{-5}$ m/s
 If the drains carry 1% of average annual rainfall in 24 hrs, the average annual rainfall for which this system has been designed will be
 (a) 78 cm (b) 84 cm
 (c) 90 cm (d) 96 cm

Ans. (*)

As per the standard notations:

- $a \rightarrow$ distance between impervious strata from the centre of the drain
- $b \rightarrow$ maximum height of drained water level above the impervious floor
- $l \rightarrow$ length of the drain
- $s \rightarrow$ centre to centre spacing between the drain

The question cannot be solved since spacing 's' is not given.

Note: If in place of $L = 50$ m, it would have been $s = 50$ m, then it would be solved like this:

$$s = \frac{4k}{q} (b^2 - a^2)$$

$$50 = \frac{4 \times 10^{-5} \times (10.3^2 - 10^2)}{q}$$

$$\therefore q = 4.872 \times 10^{-6} \text{ m}^2/\text{s}$$

$$q = \frac{1}{100} \times \bar{p} \times (s \times 1)$$

$$8.64 \times 10^4$$

where, $\bar{p} \rightarrow$ annual average rainfall

$$\bar{p} = 0.841 \text{ m} \simeq 84 \text{ cm}$$

End of Solution

96. The purpose of constructing a 'Groyne' is to
- Expand a river channel to improve its depth
 - Encourage meandering
 - Train the flow along a certain course
 - Reduce the silting in the river bed

Ans. (c)

Groynes are the structures constructed transverse to the river flow and extend from the bank into river upto a limit

They perform one or more of following functions depending on their type:

1. Training the river along the desired course to reduce the concentration of flow at a point of attack.
 2. Creating a low flow for silting up in the vicinity.
 3. Protecting the bank by keeping the flow away from it.
- In general, all the types of groynes train the flow along a certain course.

End of Solution

97. Which one of the following compounds of nitrogen, when in excessive amounts in water, contributes to the illness known as infant methemoglobinemia.
- Ammoniacal nitrogen
 - Albuminoid nitrogen
 - Nitrite
 - Nitrate

Ans. (d)

Nitrate in water in excess of 45 mg/l cause methemoglobinemia, as there are certain types of enzymes found in the intestine of infants which reduces nitrate into nitrite that has very high affinity for hemoglobin hence combines with it and leads to deficiency of O₂ and causes methemoglobinemia.

End of Solution

98. Consider the following data regarding a theoretical profile of a dam:
Permissible value of compressible stress $\sigma = 350$ tonnes/m²
Specific gravity of concrete, $s = 2.4$
Uplift coefficient, $c = 0.6$
The value of $\gamma = 1$
The height of base width will be nearly
- 125 m and 63 m
 - 175 m and 63 m
 - 125 m and 93 m
 - 175 m and 93 m

Ans. (c)

Critical or limiting height of dam,

$$H_{\text{lim}} = \frac{F}{\gamma_w (G_c - C + 1)} = \frac{350 \text{ tonnes/m}^2}{1(2.4 - 0.6 + 1)} = 125 \text{ m}$$

Base width,

$$B_{\text{min}} = \frac{H_{\text{lim}}}{\sqrt{G_c - C}} = \frac{125}{\sqrt{2.4 - 0.6}} = \frac{125}{\sqrt{1.8}} = 93.14 \text{ m} \approx 93 \text{ m}$$

End of Solution

99. Chlorine usage in the treatment of 25,000 m³/day of water has been 9 kg/day. The residual chlorine after 10 minutes contact is 0.2 mg/l. The chlorine demand of water would be nearly
- (a) 0.28 mg/l (b) 0.22 mg/l
(c) 0.16 mg/l (d) 0.12 mg/l

Ans. (c)

$$\begin{aligned} \text{Chlorine usage} &= 9 \text{ kg/d} \\ Q_0 &= 25000 \text{ m}^3/\text{d} \end{aligned}$$

$$\text{Chlorine usage} = \frac{9 \times 10^6}{25000 \times 10^3} = 0.36 \text{ mg/l}$$

$$\begin{aligned} \text{Chlorine usages} &= \text{chlorine demand} + \text{residual chlorine} \\ 0.36 &= \text{chlorine demand} + 0.2 \\ \text{Chlorine demand} &= 0.36 - 0.2 = 0.16 \text{ mg/l} \end{aligned}$$

End of Solution

100. The demand of water is 150 litres/head/day in a city of one lakh population. The factor of safety is taken as 1.5, detention time as 4 h and overflow rate as 20,000 litres/day/m². The area of 3 m deep plain sedimentation tank as per surface loading considerations will be
- (a) 1025 m² (b) 1075 m²
(c) 1125 m² (d) 1175 m²

Ans. (c)

$$\begin{aligned} \text{Design discharge} &= 1.5 \times 150 \times 10^5 = 2.25 \times 10^7 \text{ l/d} \\ \text{Overflow rate} &= 20000 \text{ l/d/m}^2 \end{aligned}$$

$$\text{Surface area} = \frac{Q_0}{\text{OFR}} = \frac{2.25 \times 10^7}{2 \times 10^4} = 1125 \text{ m}^2$$

or

$$\text{Volume} = Q_0 \times t_d = 2.25 \times 10^7 \times \frac{4}{24} = 3.75 \times 10^6 \text{ l}$$

$$\text{Surface area} = \frac{V}{H} = \frac{3.7 \times 10^6 \times 10^{-3}}{3} = 1250 \text{ m}^2$$

As per loading consideration $S_A = 1125 \text{ m}^2$

End of Solution

101. The rain intensity over 54 hectares of land is 50 mm/h, 30% of area consists of roof surfaces with runoff rate as 0.9. 30% is open field with runoff rate of 0.2 and remaining 40% is road network with runoff rate 0.4. The storm water flow will be nearly,
- (a) 2.6 m³/s (b) 3.7 m³/s
(c) 4.8 m³/s (d) 4.9 m³/s

Ans. (b)

Given data: $A = 54 \times 10^4 \text{ m}^2$
 $i = 50 \text{ mm/hr}$

$$k_{eq} = \frac{k_1 A_1 + k_2 A_2 + k_3 A_3}{A_1 + A_2 + A_3} = \frac{(0.3A \times 0.9) + (0.3A \times 0.2) + (0.4A \times 0.4)}{0.3A + 0.3A + 0.4A}$$

$$= 0.27 + 0.06 + 0.16$$

$$= 0.49$$

∴ Discharge, $Q = KiA$

$$= \frac{0.49 \times 50 \times 10^{-3} \times 54 \times 10^4}{3600 \text{ sec}} \text{ m}^3 = 3.675 \approx 3.7 \text{ m}^3/\text{sec}$$

End of Solution

102. Critical dissolved oxygen (D.O.) deficit occurs in which one of the following zones of pollution of 'oxygen sag curve' in case of self-purification of natural stream?

- (a) Zone of recovery (b) Zone of active decomposition
(c) Zone of degradation (d) Zone of clear water

Ans. (b)

Critical dissolved oxygen (DO) deficit occurs in zone of active decomposition

Table: Showing zone of pollution along a river stream					
	← Zones of pollution →				
	Clear water	Zone of degradation	Zone of active decomposition	Zone of recovery	Zone of clearer water
Dissolved oxygen sag curve					
Physical Indices	Clear, water, no bottom sludge, no colour	Floating solids; bottom sludge present, colour getting turbid	Darker and greyish colour, evolution of gases like CH_4 , CO_2 , H_2S etc. lot of sludge coming to the surface forming an ugly scum layer at top	Turbid with bottom sludge	Clear water with no bottom sludge
Fish presence	Ordinary fish like game, pan, food & forage etc. present.	Tolerant fishes like carp, buffalo, gary, etc. present	No fish present	Tolerant fish like carp, buffalo, etc. are present	Ordinary fish like game, pan, food, and forage, etc. present
Bottom Animals					
Algae & Protozoa etc. called plankton					

Here,
Zone-I : Zone of degradation
Zone-II : Zone of active decomposition
Zone-III : Zone of recovery
Zone-IV : Zone of clear water

End of Solution

103. The MLSS concentration in an aeration tank is 2000 mg/l and the sludge volume after 30 minutes of settling in a 1000 ml graduated cylinder is 176 ml. The value of sludge density index (SDI) will be nearly
- (a) 3.34 g/ml (b) 2.22 g/ml
(c) 1.14 g/ml (d) 0.26 g/ml

Ans. (c)

$$SVI = \frac{V_s}{X_s} \times 10^3 \text{ (ml/gm)}$$

V_s = volume of solids settled in 30 min = 175 ml
 X_s = concentration of solids = 2000 mg/l

$$SVI = \frac{175}{2000} \times 10^3 = 87.5 \text{ (ml/gm)}$$

$$SDI = \frac{100}{SVI} = \frac{100}{87.5} = 1.14 \text{ (g/l)}$$

End of Solution

104. Which one of the following gases is the principal by-product of anaerobic decomposition of the organic content in waste water?
- (a) Carbon monoxide (b) Ammonia
(c) Hydrogen sulphide (d) Methane

Ans. (d)

During anaerobic decomposition of organic content in waste water major gases produced are CH_4 (65-70%) and CO_2 (30%).

End of Solution

105. Consider the following statements with reference to be mixing of industrial waste water with domestic waste water:
1. The industrial waste water can be mixed with domestic water when it has higher BOD.
 2. The industrial waste water can be mixed with domestic water when the pH value of industrial waste water is highly alkaline.
- Which of the above statements is/are correct?
- (a) 1 only (b) 2 only
(c) Both 1 and 2 (d) Neither 1 nor 2

Ans. (d)

As per **IS: 3306 1974** maximum permissible limits for industrial effluent discharges for BOD and pH into public sewers is 350 mg/l and 5.5 – 9 respectively. Hence both options are correct.

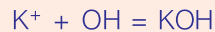
End of Solution

- 106.** The waste water from a factory having a pH of 10, contains KOH only. For waste water discharge is 80 m³/day. The total quantity of KOH per day will be nearly
- (a) 4.5 kg/day (b) 5.4 kg/day
(c) 6.3 kg/day (d) 7.2 kg/day

Ans. (*)

$$\text{pH} = 10, \text{pH} + \text{pOH} = 14, \text{pOH} = 14 - 10 = 4$$

$$-\log_{10} [\text{OH}^-] = 4 \Rightarrow [\text{OH}^-] = 10^{-4} \text{ moles/l}$$



1 mole of OH⁻ ion forms 1 moles of KOH

$$\text{Moles of KOH formed} = 10^{-4} \text{ moles/l}$$

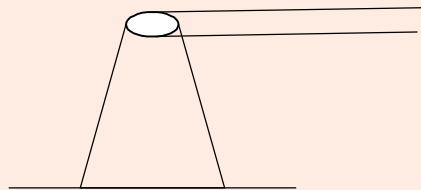
$$\begin{aligned} \text{Total quantity of KOH formed} &= 10^{-4} \times 80 \times 10^3 \times 56 \times 10^{-3} \\ &= 0.448 \text{ kg/d} = 0.45 \text{ kg/d} \end{aligned}$$

End of Solution

- 107.** Fanning type of plume behaviour takes place when
- (a) Super-adiabatic lapse rate prevails with light to moderate wind speed
(b) Extreme inversion conditions exist in the presence of light wind
(c) There exists a strong super-adiabatic lapse rate above a surface of inversion
(d) Plume is caught between two inversion layers

Ans. (b)

Fanning plume is formed under extreme inversion condition when pollutants are heavier than surrounding air, hence are not able to rise vertically up. It is formed during light turbulence and extremely stable atmosphere below the stack.



End of Solution

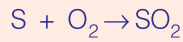
- 108.** A thermal power plant burns coal at the rate of 8 t/h. The coal has sulphur content of 4.5%. The rate of emission of SO₂ Will be
- (a) 180 g/s (b) 200 g/s
(c) 220 g/s (d) 240 g/s

Ans. (b)

$$\text{Coal burnt per sec} = \frac{8 \times 10^6}{60 \times 60} = 2222.22 \text{ gm/sec}$$

$$\text{Sulphur content} = \frac{4.5 \times 2222.22}{100} = 100 \text{ gm/sec}$$

Assuming entire sulphur is converted to SO_2



1 mole of SO_2 is formed from 1 mole of S

64 gm of SO_2 is formed from 32 gm of S

$$\text{SO}_2 \text{ emission rate} = \frac{64}{32} \times 100 = 200 \text{ gm/sec}$$

End of Solution

109. The property of clays by virtue of which they regain, if left alone for a time, a part of the strength lost due to remoulding at unaltered moisture content, is known as
- (a) Thixotropy (b) Sensitivity
(c) Consistency (d) Activity

Ans. (a)

End of Solution

110. The plastic limit and liquid limit of a soil are 30% and 42% respectively. The percentage volume change from liquid limit to dry state is 35% of the dry volume. Similarly the percentage volume change from plastic limit to dry state is 22% of the dry volume. The shrinkage ratio will be nearly
- (a) 4.2 (b) 3.1
(c) 2.2 (d) 1.1

Ans. (d)

Given data:

$$w_p = 30\%$$

$$w_L = 42\%$$

$$V_L - V_d = 0.35 V_d$$

$$V_p - V_d = 0.22 V_d$$

$$V_L = 1.35 V_d$$

$$V_p = 1.22 V_d$$

$$R = \frac{\left(\frac{V_L - V_p}{V_d} \right)}{w_L - w_p} \times 100 = \frac{V_L - V_p}{V_d} \times 100 = \frac{(1.35V_d - 1.22V_d)}{42 - 30}$$

$$R = \frac{0.13}{12} \times 100 = 1.083 \approx 1.1$$

End of Solution



MADE EASY

India's Best Institute for IES, GATE & PSUs

- ✓ Quality Teaching
- ✓ Well Planned Curriculum
- ✓ Professionally Managed
- ✓ Outstanding Results

LAUNCHING

70 DAYS SUMMER GATE COURSE for GATE 2020 **New**

Especially designed for
2nd / 3rd / 4th year college going students

CE | ME/PI | EE | EC/IN | CS

"GATE Classroom Course During College Summer Holidays"

Salient Features

- **70 days intensive course**, 8 to 10 hrs classes per day.
- Total 600-650 teaching hours.
- Lectures will be delivered by experienced faculties.
- This course is also helpful in academic gains i.e. good results in university examinations, placements etc., hence highly beneficial for college going students.
- GATE exam relevant study material will be provided.
- Subjects will be culminated with class tests and doubt clearing sessions.

Admission
open from
1st Nov, 2018

Batches
starting from
19th May, 2019

Hostel/PG facility
will be arranged.

Batches
commencing from

CE
19-May-2019

ME/PI
19-May-2019

EE
19-May-2019

EC/IN
19-May-2019

CS
19-May-2019

For fee structure, batch schedule, online admission and other details, visit : www.madeeasy.in

MADE EASY Corporate Office : 44-A/1, Kalu Sarai (Near Hauz Khas Metro Station) New Delhi-16 • Ph : 011-45124612, 9958995830

111. The ratio of a given volume change in a soil, expressed as percentage of the dry volume, to the corresponding change in water content is called
- (a) Specific gravity of soil solids (b) Mass-specific gravity of soils
(c) Shrinkage ratio of soils (d) Density ratio of soils

Ans. (c)

$$\text{Shrinkage ratio } R = \frac{V_1 - V_2}{\frac{V_d}{w_1 - w_2}} \times 100$$

End of Solution

112. A masonry is founded on pervious sand. A factor of safety of 4 is required against boiling. For the sand, $n = 45\%$ and $G_s = 2.65$. The maximum permissible upward hydraulic gradient will be nearly
- (a) 0.18 (b) 0.23
(c) 0.28 (d) 0.33

Ans. (b)

$$n = 45\% \\ G_s = 2.65 \\ \text{F.O.S} = 4$$

$$e = \frac{n}{1-n} = \frac{0.45}{1-0.45} = \frac{0.45}{0.55} = 0.818$$

$$\text{F.O.S} = \frac{i_c}{i}$$

$$\Rightarrow i = \frac{i_c}{\text{F.O.S}} = \frac{(G-1)}{\text{F.O.S}}$$

$$i = \frac{(2.65-1)}{4} = \frac{0.9075}{4} = 0.22689 \approx 0.23$$

End of Solution

113. The representative liquid limit and plastic limit values of a saturated consolidate clay deposit are 60% and 30%, respectively. The saturated unit weight of the soil is 19 kN/m³. The water table is at 8 m below ground level. At a depth of 10 m from the ground surface, the undrained shear strength of the soil will be nearly
- (a) 37.7 kN/m² (b) 33.5 kN/m²
(c) 29.3 kN/m² (d) 25.1 kN/m²

$$\begin{aligned}
 P &= \sqrt{\left(\frac{1}{2} \times 100 \times 6^2\right)^2 + \left(\frac{1}{2} \times 760 \times 6^2\right)^2} \\
 &= \sqrt{(1800)^2 + (13680)^2} = 13797.9 \text{ kg/m} \\
 &= 13797.9 \text{ kg/m} \times 9.81 = 135.357 \text{ kN/m} \\
 \text{By taking } g &= 10 \text{ m/s}^2 \\
 P &= 13797.9 \text{ kg/m} \times 10 = 137.979 \text{ kN/m}
 \end{aligned}$$

End of Solution

- 115.** The vertical stress at any point at a radial distance r and at depth z as determined by using Boussinesq's influence factor K_B and Westergaard's influence factor K_W would be almost same for $\left(\frac{r}{z}\right)$ ratios equal to or greater than
- (a) 2.0 (b) 1.8
(c) 1.5 (d) 1.2

Ans. (c)

For $\frac{r}{z} = 1.5$
 K_B and K_W would be almost same.

End of Solution

- 116.** A strip footing 2 m in width, with its base at a depth of 1.5 m below ground surface, rests on a saturated clay soil with $\gamma_{\text{sat}} = 20 \text{ kN/m}^3$, $c_u = 40 \text{ kN/m}^2$, $\phi_u = 0$, $c' = 10 \text{ kN/m}^3$, and $\phi' = 20^\circ$. The natural water table is at 1 m depth below ground level. As per IS : 6403 – 1981, the ultimate bearing capacity of this footing will be (taking the relevant N_c as 5.14)
- (a) 327 kN/m² (b) 285 kN/m²
(c) 253 kN/m² (d) 231 kN/m²

Ans. (d)

By assuming depth factor = 1
shape factor = 1
inclination factor = 1

$$\begin{aligned}
 q_{nu} &= CN_c (s_c d_c i_c) + q(N_q - 1) s_q d_q i_q + 0.5 B \gamma N_\gamma (s_\gamma d_\gamma i_\gamma) W \\
 N_c &= 5.14, N_q = 1, N_\gamma = 0 \\
 q_{nu} &= CN_c = 5.14 \times 40 \\
 q_u &= q_{nu} + \bar{\sigma} = 5.14 \times 40 + (1 \times \gamma + 0.5 \gamma') \\
 &= 5.14 \times 40 + [1 \times 20 + 0.5 \times (20 - 10)] = 230.6
 \end{aligned}$$

End of Solution

117. The settlement due to secondary compression is predominant in
 (a) Granular soils (b) Inorganic clays
 (c) Organics clays (d) Very fine sand and silts

Ans. (c)

Organic clays and highly plastic clays have secondary compression.

End of Solution

118. A raft foundation 10 m wide and 12 m long is to be constructed in a clayey soil having shear strength of 12 kN/m². Unit weight of soil is 16 kN/m³. The ground surface carries a surcharge of 20 kN/m², the factor of safety is 1.2 and the value of $N_c = 5.7$. The safe depth of foundation will be nearly
 (a) 8.2 m (b) 7.3 m
 (c) 6.4 m (d) 5.5 m

Ans. (d)

Designing as a floating Raft

Applied load + over burden+ self weight = Weight soil excavated

$$\begin{aligned}
 &= \frac{\left(1 + 0.3 \frac{B}{L}\right) CN_c + \gamma D_f(1) - \gamma D_f + (\text{Overburden})}{F} = \gamma D_f \\
 &= \frac{\left(1 + 0.3 \times \frac{10}{12}\right) \times 12 \times 5.7 + 20}{1.2} = 16D_f \\
 &= \frac{105.5}{1.2} = 16D_f \\
 D_f &= 5.49 \text{ m}
 \end{aligned}$$

End of Solution

119. The skin frictional resistance of a pile driven in sand does not depend on
 (a) Lateral earth pressure coefficient
 (b) Angle of friction between pile and soil
 (c) Pile material
 (d) Total stress analysis

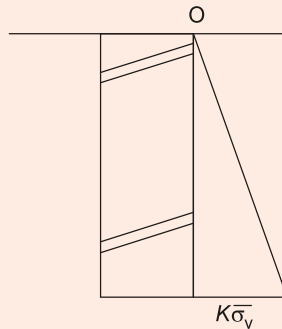
Ans. (d)

Skin frictional resistance of a pile driven in sand

$$Q_{sf} = q_s A_s = \left(\frac{1}{2} k \gamma L \tan \delta\right) A_s$$

In the presence of GWT,

$$Q_{sf} = \left(\frac{0 + k \bar{\sigma}_v}{2}\right) \tan \delta A_s$$



For piles in granular soil, the design is based on an effective stress analysis. In clays, it is common to use a "total stress" analysis in which the load capacity is related to the undrained shear strength, C_u .

End of Solution

120. An excavation is made with a vertical face in a clay soil which has $C_u = 50 \text{ kN/m}^2$, $\gamma_t = 18 \text{ kN/m}^3$ and $s_n = 0.261$. The maximum depth of a stable excavation will be nearly
- (a) 10.6 m (b) 12.4 m
(c) 14.2 m (d) 16.0 m

Ans. (a)
Taylor's stability number,

$$s_n = \frac{c}{\gamma H_c} = \frac{50}{18 \times H_c} = 0.261$$

$$H_c = 10.6428 \text{ m}$$

End of Solution

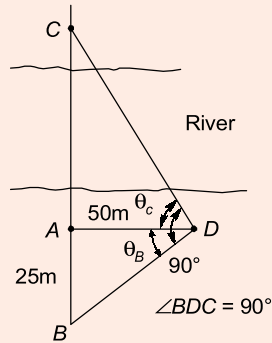
121. Reconnaissance survey for determining feasibility and estimation of scheme falls under the classification based on the
- (a) Nature of the field survey (b) Object of surveying
(c) Instruments used (d) Method employed

Ans. (b)

End of Solution

122. A survey line BAC crosses a river, A and C being on the near and distant banks respectively. Standing at D, a point 50 m measured perpendiculars to AB from A, the bearings of C and B are 320° and 230° respectively. AB being 25 m. The width of the river will be
- (a) 80 m (b) 90 m
(c) 100 m (d) 110 m

Ans. (c)



From $\triangle ABD$

$$\tan \theta_B = \frac{25}{50} \Rightarrow \theta_B = 26^\circ 33' 54''$$

$$\theta_C = (90 - \theta_B) = 90^\circ - 26^\circ 33' 54'' = 63^\circ 26' 6''$$

From $\triangle ACD$ $\tan \theta_C = \frac{AC}{AD}$

$$\Rightarrow \tan 63^\circ 26' 6'' = \frac{AC}{50} \Rightarrow AC = 100 \text{ m}$$

$$\text{Width of River} = AC = 100 \text{ m}$$

End of Solution

123. In plane surveying where a graduated staff is observed either with horizontal line of sight or inclined line of sight, the effect of refraction is to
- Increase the staff reading
 - Decrease the staff reading
 - Neither increase nor decrease the staff reading
 - Duplicate the staff reading

Ans. (c)

Neither increase nor decrease the staff reading.

End of Solution

124. A sidereal day is the average time taken by
- The Earth to move around the Sun once
 - The Moon to move around the Earth once
 - The first point of Aries to cross the same meridian successively
 - The Earth to move around its own axis once

Ans. (c)

The first point of Aries to cross the same meridian successively.

End of Solution



MADE EASY

India's Best Institute for IES, GATE & PSUs*

MADE EASY Students Top in ESE 2018

4
Streams

4 Toppers
all 4 MADE EASY Students

477 selections out of
511 vacancies

94% of total selections
are from MADE EASY

70% of selected candidates are
from classroom courses

MADE EASY created historic record by surpassing its own previous record, under the guidance of Mr. B. Singh (Ex. IES)

List of Top 20 selected candidates in ESE 2018 from MADE EASY

CE 10 in Top 10 20 in Top 20 146 Selections out of 161 vacancies	1 AIR Vinay Prakash Sharma	2 AIR Punit Singh	3 AIR Praveen Kumar	4 AIR Abhishek Bagla
	5 AIR Rishabh Dutt	6 AIR Adarsh Sapre	7 AIR Rohit Kumar Rajpoot	8 AIR Vijaya N. Pandey
	9 AIR Roopesh Mittal	10 AIR Srichand Pooniya	11 AIR Ashish Gupta	12 AIR Sakshi Gupta
	13 AIR Ankur Gupta	14 AIR Singh Jayshreedeepak	15 AIR Shashank Shekhar	16 AIR Souvik Saha
17 AIR Reema Agarwal	18 AIR Arjun Dange	19 AIR Shubham N. Nikam	20 AIR Archit Jain	
EE 10 in Top 10 20 in Top 20 101 Selections out of 108 vacancies	1 AIR Chirag Jha	2 AIR Shadab Ahamad	3 AIR Srijan Varma	4 AIR Ankit Garg
	5 AIR Karthik Kotturu	6 AIR Ratipalli N. Rao	7 AIR Tekchand Deshwal	8 AIR Manne Ravi Teja
	9 AIR Souvik Deb Roy	10 AIR Milan Krishna	11 AIR Neethu Mary Mathews	12 AIR Krishna Kumar Gupta
	13 AIR Prakash Tiwari	14 AIR Prashaanth R	15 AIR Saurabh Goyal	16 AIR Pradhuman Deolia
17 AIR Deepak S. Chauhan	18 AIR Rahul Agarwal	19 AIR Piyush Kumar Gupta	20 AIR Siram Sri R. P. Kumar	
ME 10 in Top 10 20 in Top 20 133 Selections out of 136 vacancies	1 AIR Aman Jain	2 AIR Chirag Singla	3 AIR Mayur Yashwant Patil	4 AIR Amit Kumar
	5 AIR Vitthal Pandey	6 AIR Ujjawal Sharma	7 AIR Akhil Palliwar	8 AIR Rohit Bansal
	9 AIR Pratyush Mishra	10 AIR Abhishek Kumar	11 AIR Prashant Kumar Singh	12 AIR Nishant Kumar
	13 AIR Vijay Narayan	14 AIR Mokshak Gautam	15 AIR Shubham Tyagi	16 AIR Manu Ashok Bhat
17 AIR Md Zeeshan Ali	18 AIR Vikash Shukla	19 AIR AMIT KUMAR	20 AIR Nitish Kumar Rai	
E&T 8 in Top 10 18 in Top 20 97 Selections out of 106 vacancies	1 AIR Shashank Shekhar	2 AIR Cherukuri Saideep	3 AIR Ramesh Kamulla	4 AIR Japjit Singh
	5 AIR Narendra Kumar Gupta	6 AIR Kumud Jindal	7 AIR Kartikeya Dutta	8 AIR Suryash Gautam
	11 AIR Astik Tripathi	12 AIR Varsha Sharma	13 AIR Ankit Kumar Verma	14 AIR Prashant S. Tomar
	15 AIR Manish Khanduri	16 AIR Ali Waris Khan	17 AIR Abhishek Shukla	18 AIR Gaurav Singhal
19 AIR Shivam Mittal	20 AIR Kuldeep			

Corporate office : 44-A/1, Kalu Sarai, New Delhi - 1100 16 ☎ 011-45124612, 9958995830

Centres | Delhi | Hyderabad | Noida | Jaipur | Bhopal | Lucknow | Indore | Bhubaneswar | Pune | Kolkata | Patna
 011-45124612 | 040-66774612 | 0120-6524612 | 0141-4024612 | 0755-4004612 | 09919111168 | 0731-4029612 | 09040299888 | 020-26058612 | 8981888880 | 0612-2356615

125. In triangulation, in order to control the accumulation of errors of length and azimuth subsidiary bases are selected. At certain stations, the astronomical observations for azimuth and longitude are also made. These stations are called
- (a) Transportation stations (b) Bowditch stations
(c) Universe stations (d) Laplace stations

Ans. (d)
Laplace station

End of Solution

126. A vertical photograph is taken at an altitude of 1200 m 'above mean sea level' (a.m.s.l.) of a terrain lying at an elevation of 80 m a.m.s.l. The focal length of camera is 15 cm. The scale of the photograph will be nearly
- (a) 1 : 8376 (b) 1 : 7467
(c) 1 : 6558 (d) 1 : 5649

Ans. (b)
 $H = 1200 \text{ m}, h = 80 \text{ m}, f = 15 \text{ cm}$

$$\text{Scale} = \frac{f}{H-h} = \frac{15 \times 10^{-2}}{1200-80} = \frac{1}{7466.67}$$

Scale = (1 : 7467)

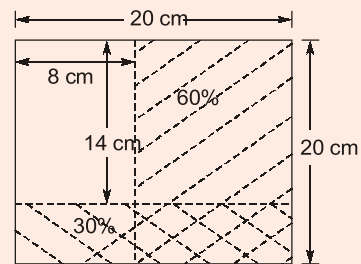
End of Solution

127. Aerial photographs are required to be taken to cover an area of 150 km². The longitudinal and side overlaps are to be 60% and 30% respectively. The scale of photograph is 1 cm = 100 m, and the size of each photograph is 20 cm × 20 cm. The minimum required number of photographs will be
- (a) 170 (b) 158
(c) 146 (d) 134

Ans. (d)

Area of ground = 150 km²
Overlap: Longitudinal = 60%; Lateral = 30%
Scale : 1 cm = 100 m = 0.1 km
Photosize = 20 cm × 20 cm

Now l = length covered by 1 photo
= 8 × 0.1 = 0.8 km
 b = width covered by 1 photo
= 14 × 0.1 = 1.4 km
 a = Area covered by 1 photo
= $l \times b = 0.8 \times 1.4 = 1.12 \text{ km}^2$



$$\text{Min. no. of photographs} = \left(\frac{A}{a} \right) = \left(\frac{150}{1.12} \right) = 133.92 \approx 134 \text{ photos}$$

End of Solution

128. Which one of the following conditions is **not** correct with respect to the transition curve?
- (a) It should be tangential to the straight approaches at the two ends.
 - (b) It should meet the circular curve tangentially.
 - (c) Its curvature will necessarily be non-zero at the point of take-off from the straight approaches.
 - (d) The rate of increase of curvature along the transition reach should match with the increase of cant.

Ans. (c)

its curvature will necessarily be non-zero at the point of take-off from the straight approach.

End of Solution

129. A circular curve has a long chord of 80 m and a versed sine of 4 m. The height and ordinate at a distance of 30 m from the mid-ordinate will be nearly
- (a) 3.06 m
 - (b) 2.72 m
 - (c) 2.24 m
 - (d) 1.76 m

Ans. (d)

By ordinate from the long chord

Ordinate at distance x from the mid point of the chord = O_x

$$O_x = \sqrt{R^2 - x^2} - (R - O_0)$$

$$O_x = \sqrt{R^2 - x^2} - (R - O_0)$$

$$O_0 = R - \sqrt{R^2 - \left(\frac{L}{2}\right)^2}$$

Given data:

$$O_0 = \text{Versed sine} = 4 \text{ m}$$

$$L = \text{Longest chord} = 80 \text{ m}$$

$$x = 30 \text{ m}$$

Versed Sine (O_0)

$$O_0 = R - \sqrt{R^2 - \left(\frac{L}{2}\right)^2}$$

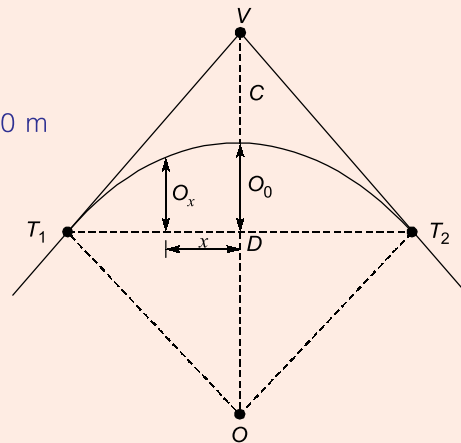
$$4 \text{ m} = R - \sqrt{R^2 - \left(\frac{80}{2}\right)^2}$$

⇒

$$R = 202 \text{ m}$$

$$O_x = \sqrt{R^2 - x^2} - (R - O_0)$$

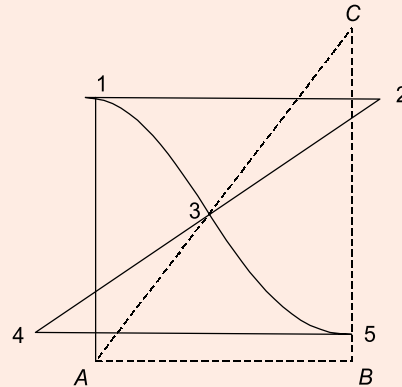
$$O_{30} = \sqrt{202^2 - 30^2} - (202 - 4) \\ = 1.759 \approx 1.76 \text{ m}$$



End of Solution

130. Two parallel railway lines are to be connected by a reverse curve, each section having the same radius. If the lines are 12 m apart and the maximum distance between tangent points measured parallel to the straights is 48 m, then the maximum allowable radius will be
- (a) 51.1 m (b) 52.3 m
(c) 53.5 m (d) 54.7 m

Ans. (a)



$$D = 12 \text{ m}$$

$$AB = \sqrt{AC^2 + BC^2}$$

$$AB^2 = AC^2 - BC^2$$

$$48^2 = (2R)^2 - (2R - D)^2$$

$$48^2 = 4R^2 - 4R^2 - D^2 + 4RD$$

$$\frac{48^2 + D^2}{4 \times D} = R$$

$$\frac{48^2 + 12^2}{4 \times 12} = R$$

$$R = 51 \text{ m}$$

End of Solution

131. In an old map, a line AB was drawn to a magnetic bearing of $5^\circ 30'$, the magnetic declination at the time being 1° East. If the present magnetic declination is $8^\circ 30'$ East, the line should be set to a magnetic bearing of
- (a) 358° (b) 2°
(c) $6^\circ 30'$ (d) 357°

Ans. (a)

Old Map

$$MB = 5^\circ 30'$$

$$\delta_E = 1^\circ$$

$$TB = MB + \delta_E$$

$$= 5^\circ 30' + 1^\circ = 6^\circ 30'$$

Present:

$$TB = 6^{\circ}30'$$

$$\delta_E(\text{present}) = 8^{\circ}30'$$

$$TB = MB + \delta_E$$

$$6^{\circ}30' = MB + 8^{\circ}30'$$

$$MB = 6^{\circ}30' - 8^{\circ}30'$$

$$= -2^{\circ}$$

$$= (360^{\circ} - 2^{\circ})$$

$$= 358^{\circ}$$

End of Solution

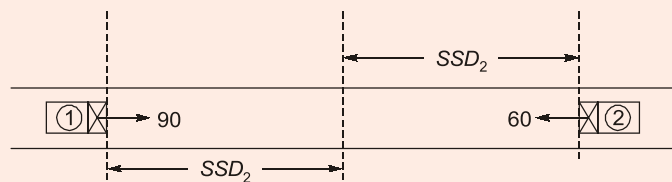
132. An unconformity is
- A surface of erosion or non-deposition as detected in a sequence of rocks
 - A layer of boulders and pebbles in a sequence of rocks
 - A layer of clay or shale in an igneous mass
 - A type of joint especially associated with folded and faulted rocks

Ans. (a)

End of Solution

133. Consider two cars approaching from the opposite directions at 90 km/h and 60 km/h. If the reaction time is 2.5 s, coefficient of friction is 0.7 and brake efficiency is 50% in both the cases, the minimum sight distance required to avoid a head-on collision will be nearly
- 154 m
 - 188 m
 - 212 m
 - 236 m

Ans. (d)



Braking eff = 50% $f = 0.7$

$$SD = SSD_1 + SSD_2$$

$$= \left[0.278V_1t_R + \frac{V_1^2}{254(n_B f)} \right] + \left[0.278V_2t_R + \frac{V_2^2}{254(n_B f)} \right]$$

$$= \left[0.278 \times 90 \times 2.5 + \frac{90^2}{254 \times (0.5 \times 0.7)} \right] +$$

$$\left[0.278 \times 60 \times 2.5 + \frac{60^2}{254(0.5 \times 0.7)} \right]$$

$$= 153.67 + 82.195 = 235.865 \text{ m}$$

$$\approx 236 \text{ m}$$

End of Solution

134. What is the extra widening required (as nearest magnitude) for a pavement of 7 m width on a horizontal curve of radius 200 m, if the longest wheel of vehicle expected on the road is 6.5 m and the design speed is 65 km/h?
- (a) 0.3 m (b) 0.5 m
(c) 0.7 m (d) 0.9 m

Ans. (c)

Road width = 7 m (i.e., No of lane 2)

Extra widening

$$W_E = \frac{nl^2}{2R} + \frac{V}{9.5\sqrt{R}} \quad (R = 200 \text{ m}; l = 6.5 \text{ m}; V = 65 \text{ kmph})$$

$$= \frac{2 \times 6.5^2}{2 \times 200} + \frac{65}{9.5\sqrt{200}}$$

$$= 0.695 \text{ m} \approx 0.7 \text{ m}$$

End of Solution

135. A vehicle moving at 40 km/h speed was stopped by applying brake and the length of the skid mark was 12.2 m. If the average skid resistance of the pavement is 0.70, the brake efficiency of the test vehicle will be nearly
- (a) 80% (b) 74%
(c) 68% (d) 62%

Ans. (b)

$u = 40 \text{ kmph}; L = 12.2 \text{ m}; f = 0.7$

$$f_{\text{obtained}} = \frac{u^2}{2gL} = \frac{(0.278 \times 40)^2}{2 \times 9.81 \times 12.2} = 0.5166$$

$$\eta_{\text{Braking}} = \left(\frac{f_{\text{obtained}}}{f_{\text{max}}} \times 100 \right) = \left(\frac{0.5166}{0.7} \times 100 \right) = 73.8\% \approx 74\%$$

End of Solution

136. The main drawback of automatic counters-cum-classifiers, used for traffic volume studies, is that it is not yet possible to classify and record
- (a) Vehicle type (b) Axle spacing
(c) Axle load (d) Speed

Ans. (a)

End of Solution

137. Which one of the following is **not** a part of 'speed and delay' studies?
- (a) Floating car method (b) Vehicle number method
(c) Interview technique (d) License number method

Ans. (b)

End of Solution

138. Consider the following data with respect to the design of flexible pavement:

Design wheel load = 4200 kg

Tyre pressure = 6.0 kg/cm²

Elastic modulus = 150 kg/cm²

Permissible deflection = 0.25 cm

(take $\pi^{1/2} = 1.77$, $\pi^{-1/2} = 0.564$, $\frac{1}{\pi} = 0.318$, and $\pi^2 = 9.87$)

The total thickness of flexible pavement for a single layer elastic theory will be nearly

(a) 42 cm

(b) 47 cm

(c) 51 cm

(d) 56 cm

Ans. (c)

$P = 4200$ kg; $p = 6$ kg/cm²; $E = 150$ kg/cm²; $\Delta = 0.25$ cm

$$p = \frac{P}{\pi a^2}$$

$$\Rightarrow 6 = \frac{4200}{\pi \times a^2} \Rightarrow a = 14.92 \text{ cm}$$

Radius of contact area = $a = 14.92$ cm

Thickness of pavement by single layer elastic theory

$$\begin{aligned} T &= \sqrt{\left(\frac{3P}{2\pi E_s \Delta}\right)^2 - a^2} \\ &= \sqrt{\left(\frac{3 \times 4200}{2\pi \times 150 \times 0.25}\right)^2 - 14.92^2} \\ &= 51.352 \text{ cm} \approx 51 \text{ cm} \end{aligned}$$

End of Solution

139. The minimum possible grade that can be provided in a tunnel and its approaches with providing adequately for proper drainage is

(a) 0.1%

(b) 0.2%

(c) 0.3%

(d) 0.4%

Ans. (*)

End of Solution

140. The section of the tunnel adopted perfectly in lieu of ease of construction and maintenance in hard rock tunnels, where the risk of roof failure or collapse caused by external pressure from water, or from loose or unstable soil conditions on tunnel lining is practically non-existent, is

(a) Circular section

(b) Segmental roof section

(c) Horse-shoe section

(d) Egg-shaped section

Ans. (b)

End of Solution

141. Which one of the following methods is adopted for tunneling in soft soils?
- (a) Pilot tunnel method (b) Drift method
(c) Needle beam method (d) Heading and benching method

Ans. (c)

End of Solution

142. Which one of the following features does **not** pertain to Littoral drift?
- (a) It depends on length of wave
(b) It is the process of erosion or deposition by waves
(c) Waves caused by prevailing wind, stir up and move sand particles
(d) Wind tends to carry drifting sand in a zigzag way

Ans. (d)

End of Solution

143. Consider the following data for designing a taxiway for operating Boeing 707-320 aeroplane:

Wheel base = 17.70 m

Tread of main loading gear = 6.62 m

Turning speed = 40 km/h

Coefficient of friction between tyres and pavement surface = 0.13

The turning radius of the taxiway will be

- (a) 98.5 m (b) 94.5 m
(c) 89.5 m (d) 86.5 m

Ans. (a)

1.
$$R = \frac{V^2}{125f} = \frac{40^2}{125 \times 0.13} = 98.46 \text{ m}$$

2.
$$R = \frac{0.388w^2}{\frac{T}{2} - S} = \frac{0.388 \times 17.7^2}{\frac{22.5}{2} - \left(\frac{6.62}{2} + 6\right)} = 62.66 \text{ m}$$

End of Solution

144. Which one of the following instances of performance of aircraft is **not** considered for determining basic runway length?

- (a) Normal landing case (b) Normal take-off case
(c) Engine failure case (d) Emergency landing case

Ans. (d)

End of Solution

Directions : Each of the next **six (06)** items consists of two statements, one labelled as 'Statement (I)' and the other as 'Statement (II)'. Examine these two statements carefully and select the answers to these items using the codes given below:

Codes:

- (a) Both Statement (I) and Statement (II) are individually true, and Statement (II) is the correct explanation of Statement (I)
- (b) Both Statement (I) and Statement (II) are individually true, but Statement (II) is NOT the correct explanation of Statement (I)
- (c) Statement (I) is true, but Statement (II) is false
- (d) Statement (I) is false, but Statement (II) is true

Q.145 Statement (I) : Expansive cement is used in repair work for opened up joints.
Statement (II) : Expansive cement expands while hardening.

Ans. (a)

End of Solution

Q.146 Statement (I) : Plastic hinges are developed when stress at every point is equal to yield stress.
Statement (II) : Plastic hinges are formed at sections subjected to the greatest curvature.

Ans. (b)

End of Solution

Q.147 Statement (I) : If degree of fixity at supports is lessened, the maximum hogging moment at the ends will decrease.
Statement (II) : If degree of fixity at supports is lessened, the maximum sagging moment at mid-span decreases.

Ans. (c)

End of Solution

Q.148 Statement (I) : Torsion reinforcement is provided at (and near) corners in a two-way slab which is simply supported on both edges meeting at the corner.
Statement (II) : The area of reinforcement in each of the layers shall be three-quarters of the area required for maximum mid-span moment in the slab.

Ans. (b)

End of Solution

Q.149 Statement (I) : The inclination of the resultant stress with normal can exceed the angle of repose (adopting old terminology).
Statement (II) : The ratio of the difference between greatest and least intensities of pressure to their sum cannot exceed the sine of the angle of repose (adopting old terminology).

Ans. (d)

The maximum slope at which a material, dropped down through a natural process, remains stable, is called angle of repose.

The angle of repose of a granular soil can be determined by pouring the material on a level surface from a small height and measuring the angle between the sloping surface and the horizontal.

The angle of repose is approximately equal to the angle of internal friction of the soil. At the failure plane angle of obliquity is maximum, which is also termed as internal angle of friction.

At failure plane, resultant stress with normal stress makes maximum angle of obliquity.

$$\Rightarrow \sigma_1 = \sigma_3 \tan^2 \left(45 + \frac{\phi}{2} \right) + 2c \tan \left(45 + \frac{\phi}{2} \right)$$

$$\sigma_1 = \sigma_3 \left(\frac{1 + \sin \phi}{1 - \sin \phi} \right)$$

$$\sin \phi = \frac{\sigma_1 - \sigma_3}{\sigma_1 + \sigma_3}$$

End of Solution

Q.150 Statement (I) : Alum works in slightly alkaline range.

Statement (II) : At higher temperatures, viscosity of water (resistance to settling) decreases and flocs settle better.

Ans. (b)

Statement-II alum works in pH range of 6.5 – 8.5, hence works in slightly alkaline range.

Statement-I with increase in temperature viscosity of water decrease hence resistance to settling decreasing there by flocs settle better.

End of Solution

